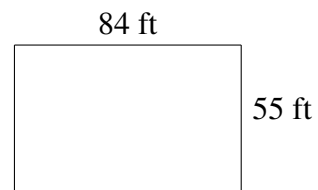
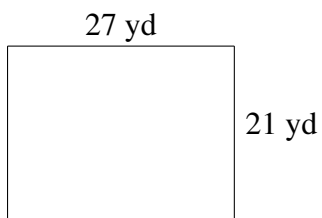
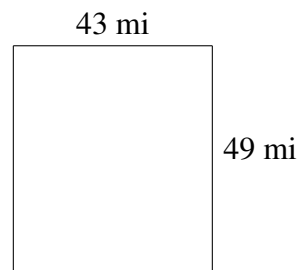
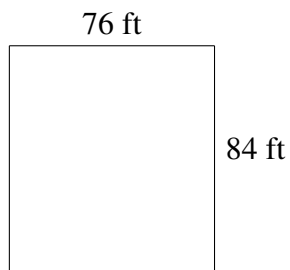
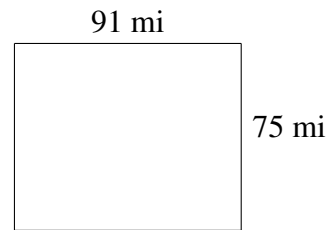
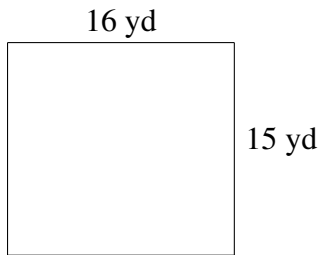


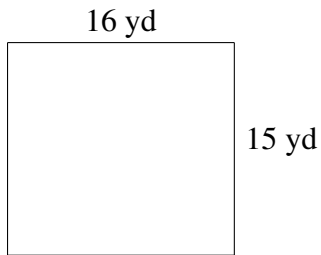
Área y Perímetro de Rectángulos (B)

Halle el área y el perímetro de cada rectángulo.

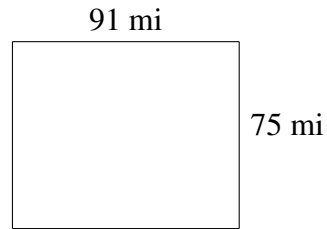


Área y Perímetro de Rectángulos (B) Respuestas

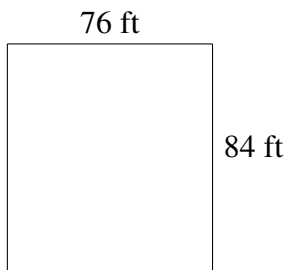
Halle el área y el perímetro de cada rectángulo.



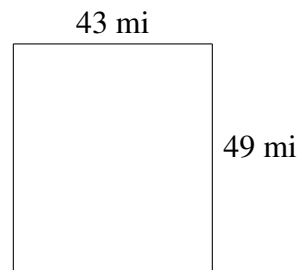
$$A = 240 \text{ yd}^2$$
$$P = 62 \text{ yd}$$



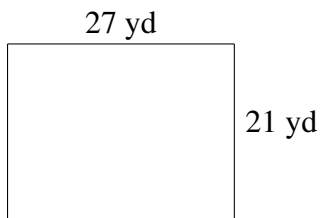
$$A = 6825 \text{ mi}^2$$
$$P = 332 \text{ mi}$$



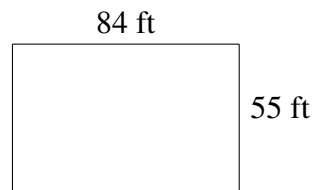
$$A = 6384 \text{ ft}^2$$
$$P = 320 \text{ ft}$$



$$A = 2107 \text{ mi}^2$$
$$P = 184 \text{ mi}$$



$$A = 567 \text{ yd}^2$$
$$P = 96 \text{ yd}$$



$$A = 4620 \text{ ft}^2$$
$$P = 278 \text{ ft}$$