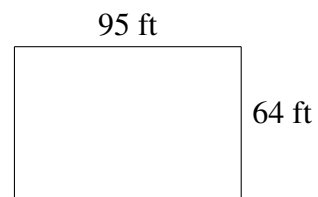
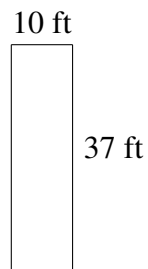
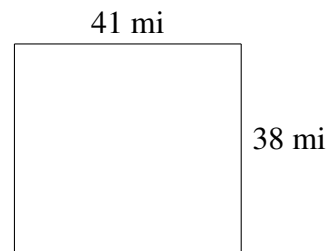
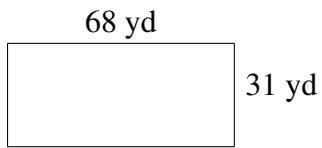
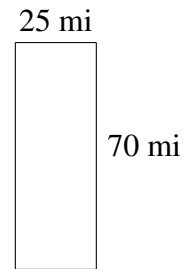
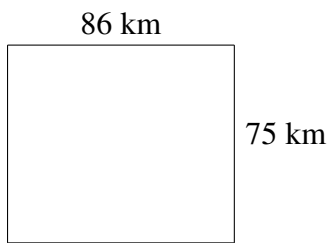


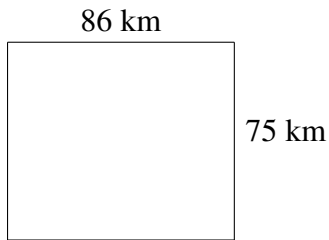
# Área y Perímetro de Rectángulos (H)

Halle el área y el perímetro de cada rectángulo.

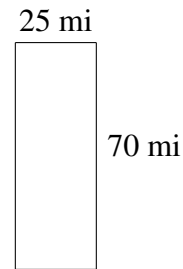


# Área y Perímetro de Rectángulos (H) Respuestas

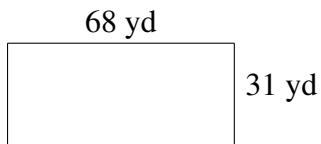
Halle el área y el perímetro de cada rectángulo.



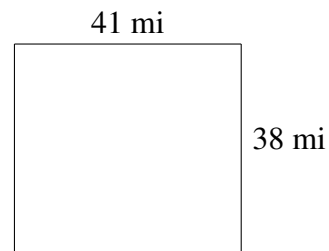
$$A = 6450 \text{ km}^2$$
$$P = 322 \text{ km}$$




$$A = 1750 \text{ mi}^2$$
$$P = 190 \text{ mi}$$



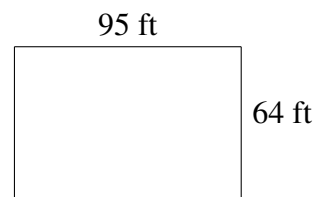
$$A = 2108 \text{ yd}^2$$
$$P = 198 \text{ yd}$$



$$A = 1558 \text{ mi}^2$$
$$P = 158 \text{ mi}$$



$$A = 370 \text{ ft}^2$$
$$P = 94 \text{ ft}$$



$$A = 6080 \text{ ft}^2$$
$$P = 318 \text{ ft}$$