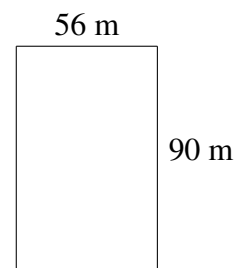
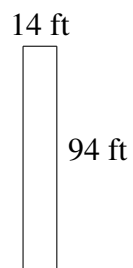

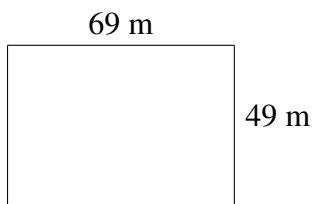
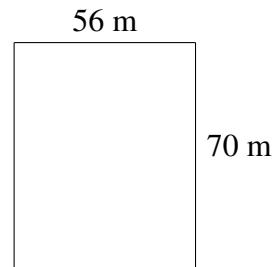




Área y Perímetro de Rectángulos (J)

Halle el área y el perímetro de cada rectángulo.

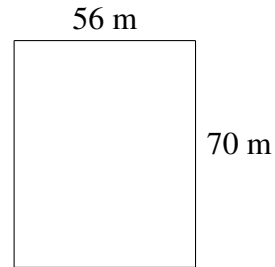


Área y Perímetro de Rectángulos (J) Respuestas

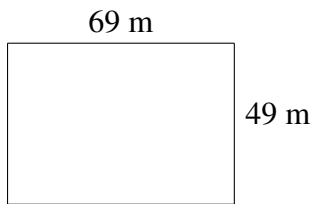
Halle el área y el perímetro de cada rectángulo.




$$A = 3960 \text{ km}^2$$
$$P = 278 \text{ km}$$




$$A = 3920 \text{ m}^2$$
$$P = 252 \text{ m}$$



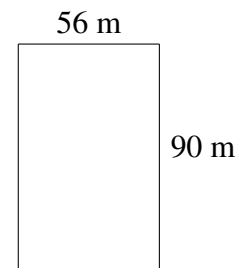
$$A = 3381 \text{ m}^2$$
$$P = 236 \text{ m}$$



$$A = 2079 \text{ ft}^2$$
$$P = 208 \text{ ft}$$



$$A = 1316 \text{ ft}^2$$
$$P = 216 \text{ ft}$$



$$A = 5040 \text{ m}^2$$
$$P = 292 \text{ m}$$