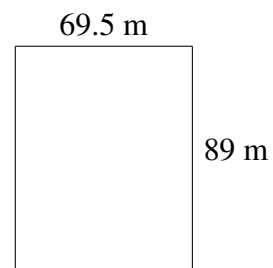
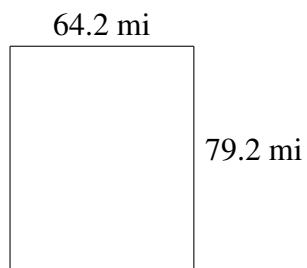
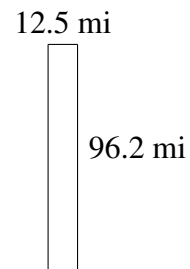

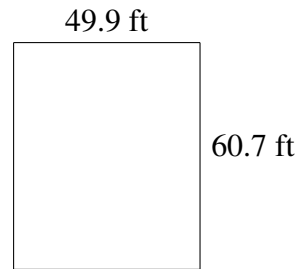



Área y Perímetro de Rectángulos (B)


Halle el área y el perímetro de cada rectángulo.



Área y Perímetro de Rectángulos (B) Respuestas

Halle el área y el perímetro de cada rectángulo.


10.7 ft



54.1 ft

$$A = 578.87 \text{ ft}^2$$
$$P = 129.6 \text{ ft}$$

49.9 ft



60.7 ft

$$A = 3028.93 \text{ ft}^2$$
$$P = 221.2 \text{ ft}$$

15.9 m



86.5 m

$$A = 1375.35 \text{ m}^2$$
$$P = 204.8 \text{ m}$$

12.5 mi



96.2 mi

$$A = 1202.50 \text{ mi}^2$$
$$P = 217.4 \text{ mi}$$


64.2 mi



79.2 mi

$$A = 5084.64 \text{ mi}^2$$
$$P = 286.8 \text{ mi}$$

69.5 m



89 m

$$A = 6185.5 \text{ m}^2$$
$$P = 317.0 \text{ m}$$