
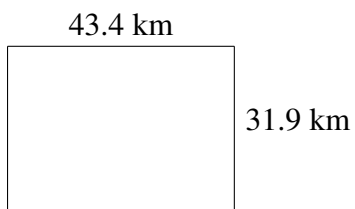
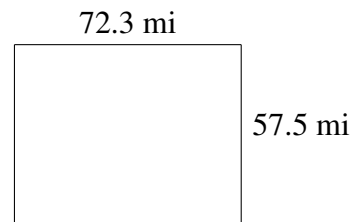
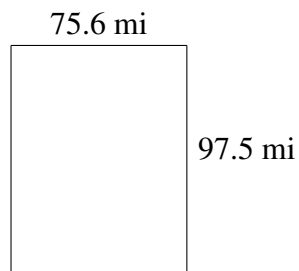
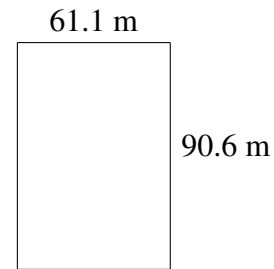
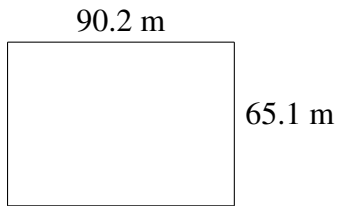


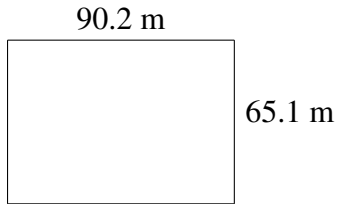
## Área y Perímetro de Rectángulos (E)

Halle el área y el perímetro de cada rectángulo.

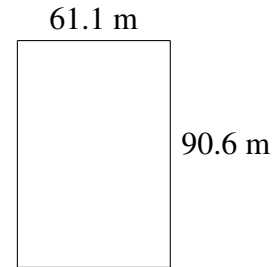


# Área y Perímetro de Rectángulos (E) Respuestas

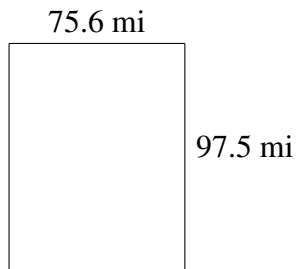
Halle el área y el perímetro de cada rectángulo.



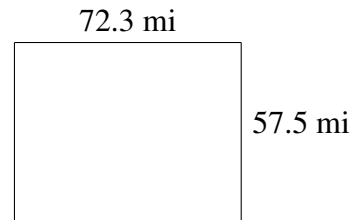
$$A = 5872.02 \text{ m}^2$$
$$P = 310.6 \text{ m}$$



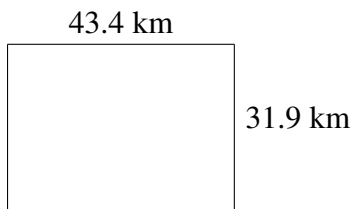
$$A = 5535.66 \text{ m}^2$$
$$P = 303.4 \text{ m}$$




$$A = 7371.00 \text{ mi}^2$$
$$P = 346.2 \text{ mi}$$



$$A = 4157.25 \text{ mi}^2$$
$$P = 259.6 \text{ mi}$$



$$A = 1384.46 \text{ km}^2$$
$$P = 150.6 \text{ km}$$



$$A = 2022.9 \text{ km}^2$$
$$P = 188.6 \text{ km}$$