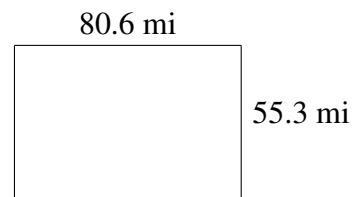
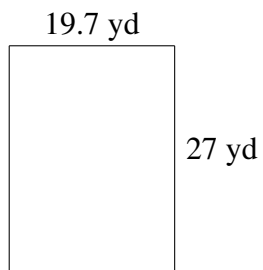
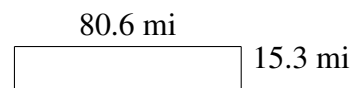
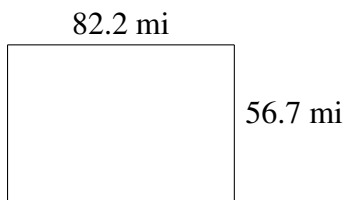
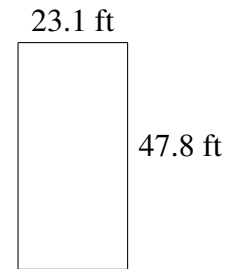
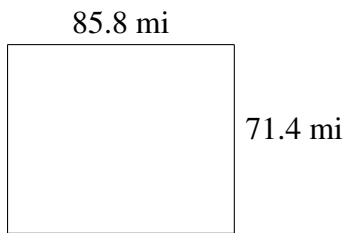


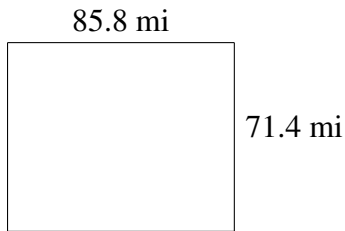
Área y Perímetro de Rectángulos (I)

Halle el área y el perímetro de cada rectángulo.

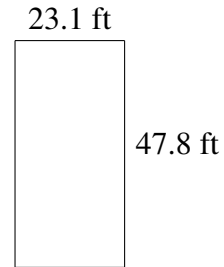


Área y Perímetro de Rectángulos (I) Respuestas

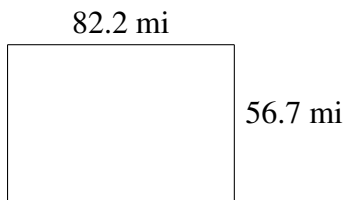
Halle el área y el perímetro de cada rectángulo.



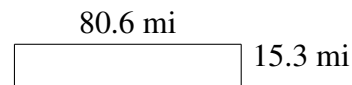
$$A = 6126.12 \text{ mi}^2$$
$$P = 314.4 \text{ mi}$$



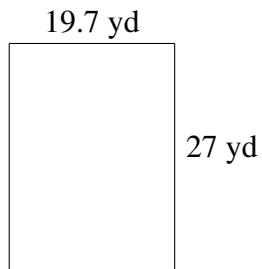
$$A = 1104.18 \text{ ft}^2$$
$$P = 141.8 \text{ ft}$$



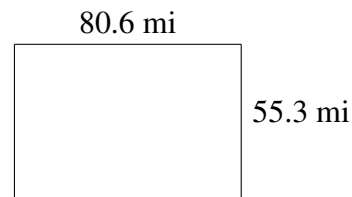
$$A = 4660.74 \text{ mi}^2$$
$$P = 277.8 \text{ mi}$$



$$A = 1233.18 \text{ mi}^2$$
$$P = 191.8 \text{ mi}$$



$$A = 531.9 \text{ yd}^2$$
$$P = 93.4 \text{ yd}$$



$$A = 4457.18 \text{ mi}^2$$
$$P = 271.8 \text{ mi}$$