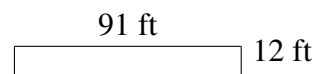
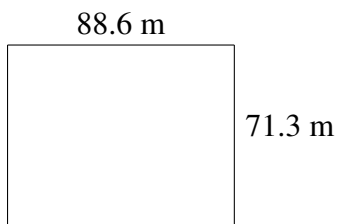
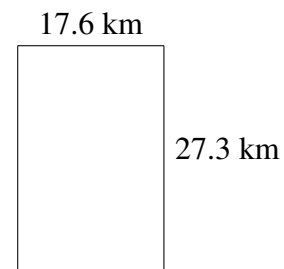
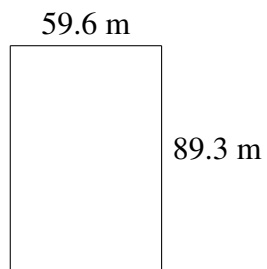
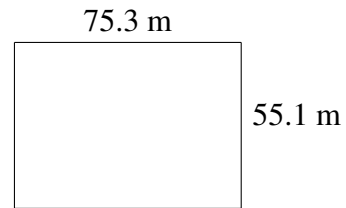
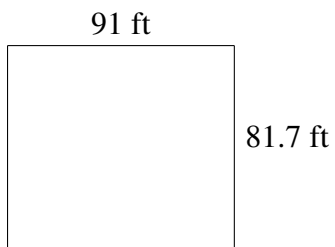


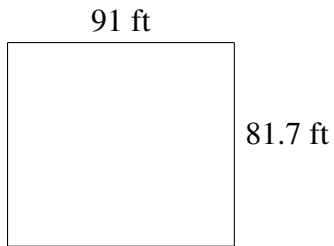
Área y Perímetro de Rectángulos (J)

Halle el área y el perímetro de cada rectángulo.

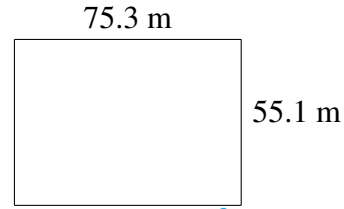


Área y Perímetro de Rectángulos (J) Respuestas

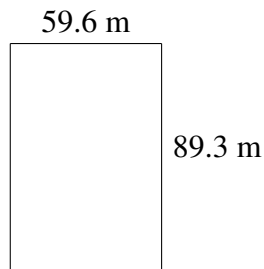
Halle el área y el perímetro de cada rectángulo.



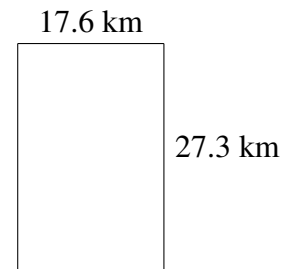
$$A = 7434.7 \text{ ft}^2$$
$$P = 345.4 \text{ ft}$$



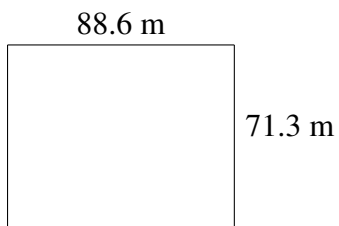
$$A = 4149.03 \text{ m}^2$$
$$P = 260.8 \text{ m}$$



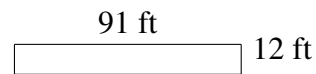
$$A = 5322.28 \text{ m}^2$$
$$P = 297.8 \text{ m}$$



$$A = 480.48 \text{ km}^2$$
$$P = 89.8 \text{ km}$$



$$A = 6317.18 \text{ m}^2$$
$$P = 319.8 \text{ m}$$



$$A = 1092 \text{ ft}^2$$
$$P = 206 \text{ ft}$$