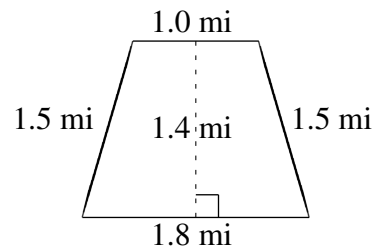
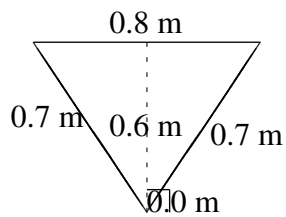
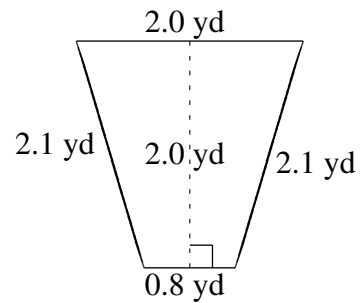
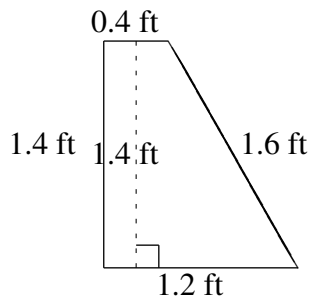
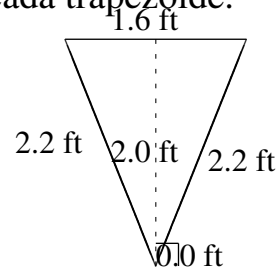
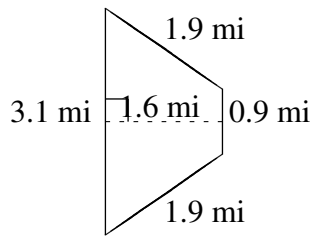


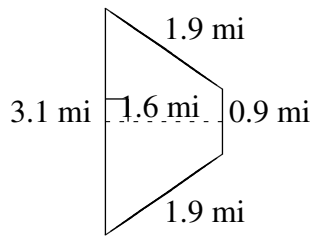
Área y Perímetro de Trapezoides (B)

Halle el área y perímetro de cada trapezoide.



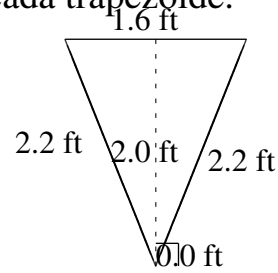
Área y Perímetro de Trapezoides (B) Respuestas

Halle el área y perímetro de cada trapezoide.



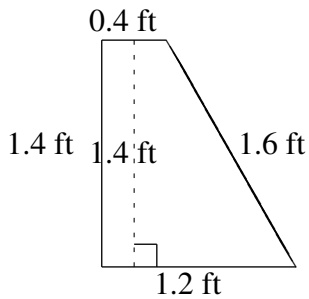
$$A = 3.20 \text{ mi}^2$$

$$P = 7.8 \text{ mi}$$



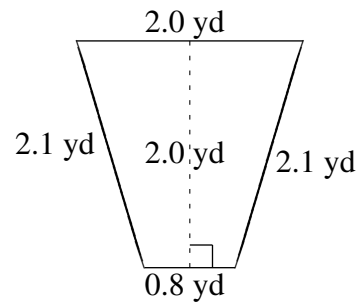
$$A = 1.60 \text{ ft}^2$$

$$P = 6.0 \text{ ft}$$



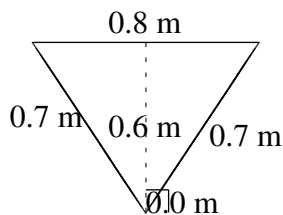
$$A = 1.12 \text{ ft}^2$$

$$P = 4.6 \text{ ft}$$



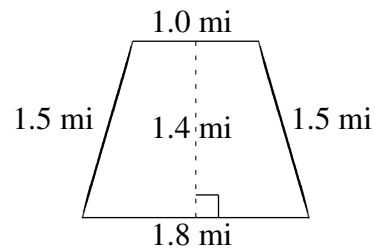
$$A = 2.80 \text{ yd}^2$$

$$P = 7.0 \text{ yd}$$



$$A = 0.24 \text{ m}^2$$

$$P = 2.2 \text{ m}$$



$$A = 1.96 \text{ mi}^2$$

$$P = 5.8 \text{ mi}$$