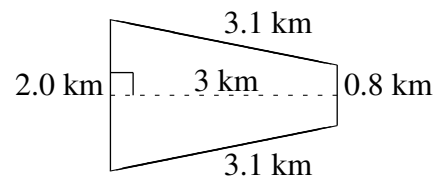
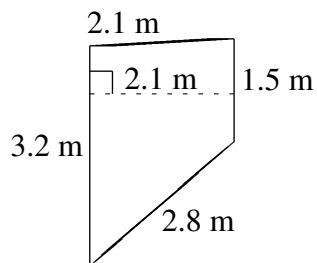
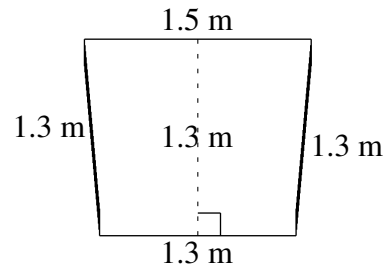
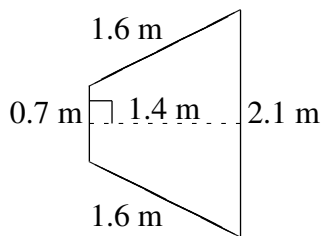
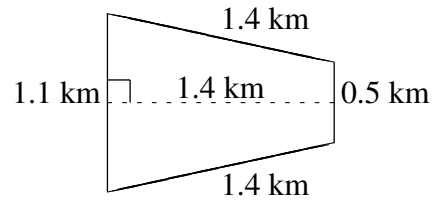
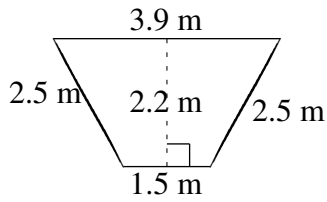


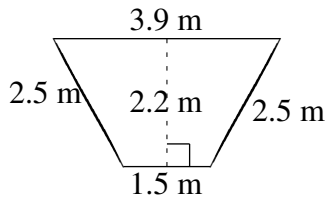
# Área y Perímetro de Trapezoides (C)

Halle el área y perímetro de cada trapezoide.

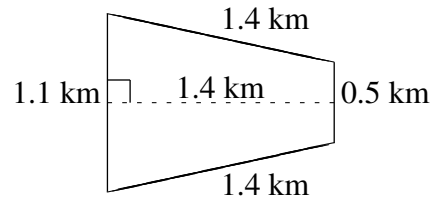


# Área y Perímetro de Trapezoides (C) Respuestas

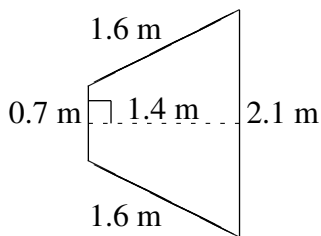
Halle el área y perímetro de cada trapezoide.



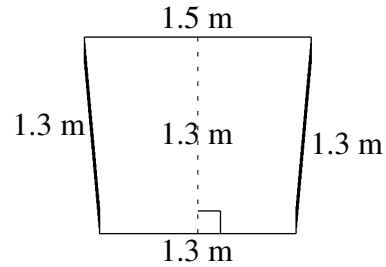
$$A = 5.94 \text{ m}^2$$
$$P = 10.4 \text{ m}$$



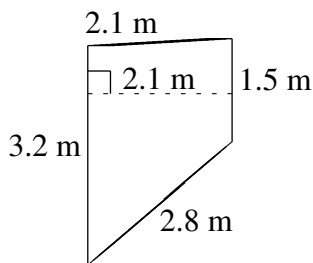
$$A = 1.12 \text{ km}^2$$
$$P = 4.4 \text{ km}$$



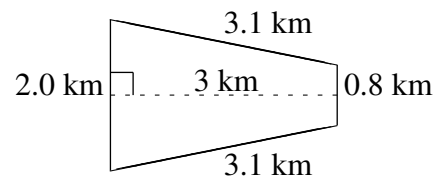
$$A = 1.96 \text{ m}^2$$
$$P = 6.0 \text{ m}$$



$$A = 1.82 \text{ m}^2$$
$$P = 5.4 \text{ m}$$



$$A = 4.935 \text{ m}^2$$
$$P = 9.6 \text{ m}$$



$$A = 4.2 \text{ km}^2$$
$$P = 9.0 \text{ km}$$