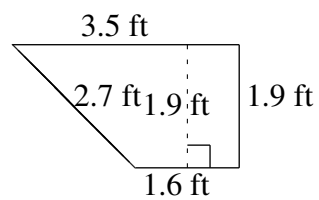
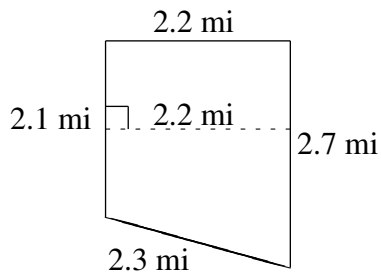
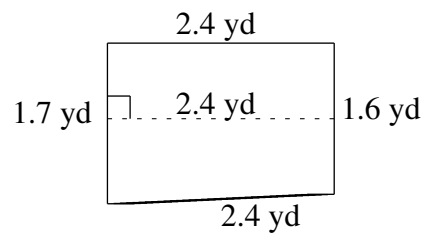
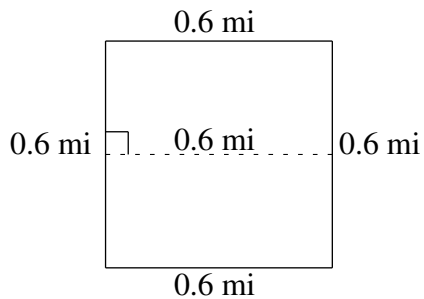
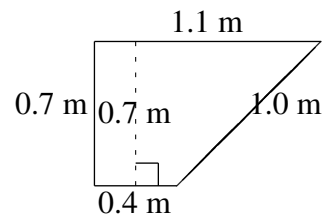
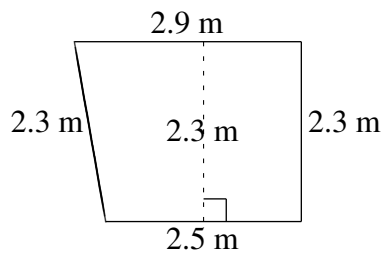


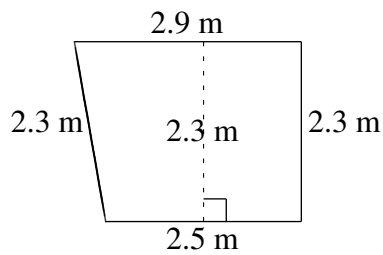
Área y Perímetro de Trapezoides (E)

Halle el área y perímetro de cada trapezoide.



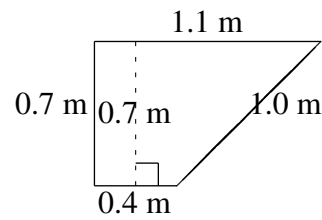
Área y Perímetro de Trapezoides (E) Respuestas

Halle el área y perímetro de cada trapezoide.



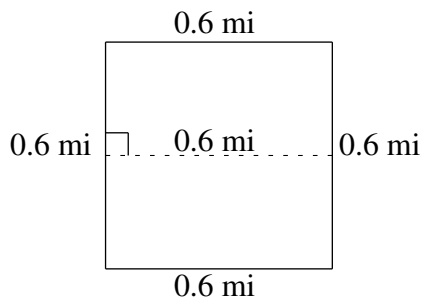
$$A = 6.21 \text{ m}^2$$

$$P = 10.0 \text{ m}$$



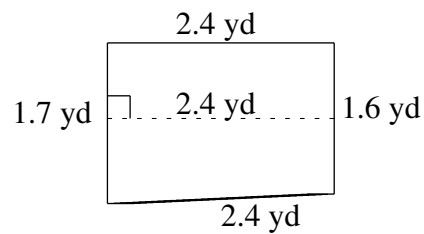
$$A = 0.525 \text{ m}^2$$

$$P = 3.2 \text{ m}$$



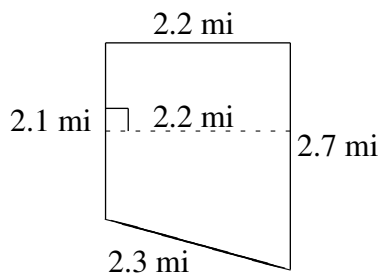
$$A = 0.36 \text{ mi}^2$$

$$P = 2.4 \text{ mi}$$



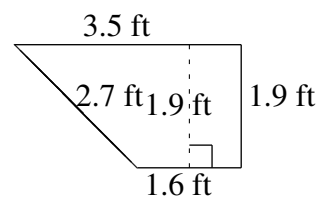
$$A = 3.96 \text{ yd}^2$$

$$P = 8.1 \text{ yd}$$



$$A = 5.28 \text{ mi}^2$$

$$P = 9.3 \text{ mi}$$



$$A = 4.845 \text{ ft}^2$$

$$P = 9.7 \text{ ft}$$