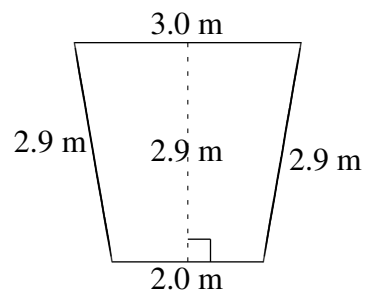
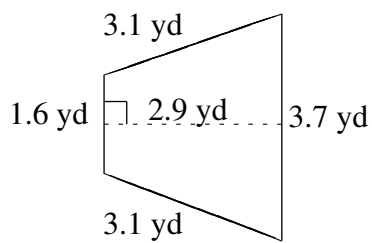
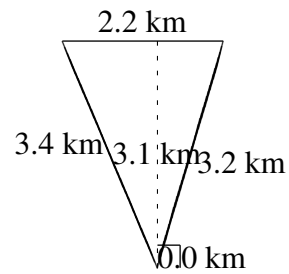
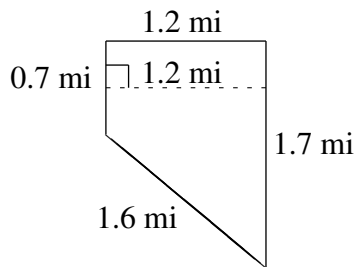
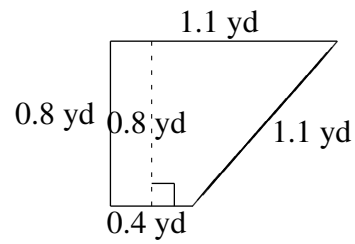
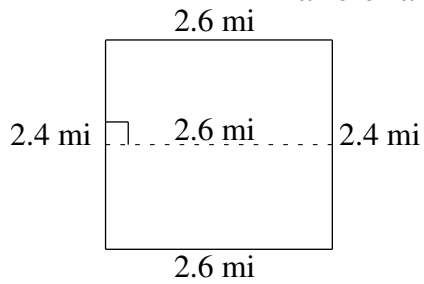


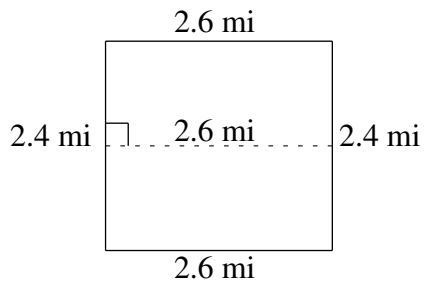
Área y Perímetro de Trapezoides (F)

Halle el área y perímetro de cada trapezoide.



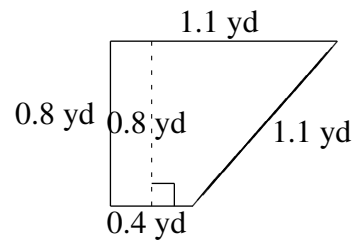
Área y Perímetro de Trapezoides (F) Respuestas

Halle el área y perímetro de cada trapezoide.



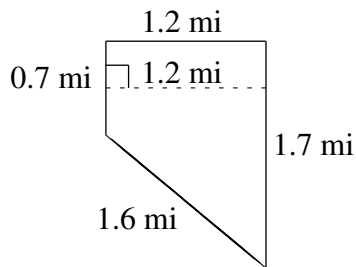
$$A = 6.24 \text{ mi}^2$$

$$P = 10.0 \text{ mi}$$



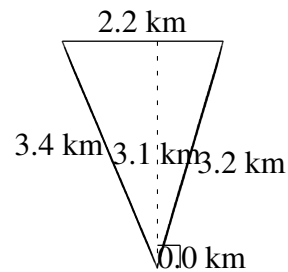
$$A = 0.60 \text{ yd}^2$$

$$P = 3.4 \text{ yd}$$



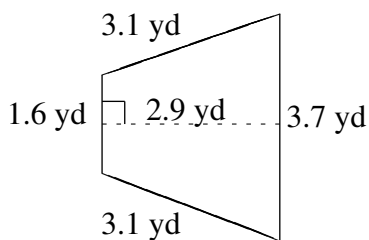
$$A = 1.44 \text{ mi}^2$$

$$P = 5.2 \text{ mi}$$



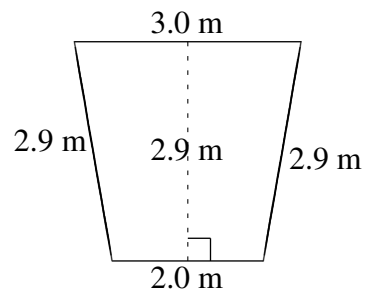
$$A = 3.41 \text{ km}^2$$

$$P = 8.8 \text{ km}$$



$$A = 7.685 \text{ yd}^2$$

$$P = 11.5 \text{ yd}$$



$$A = 7.25 \text{ m}^2$$

$$P = 10.8 \text{ m}$$