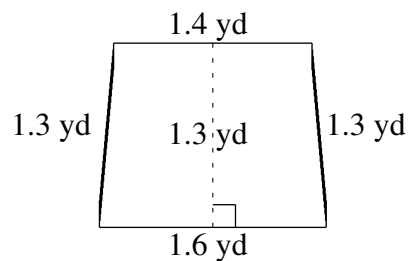
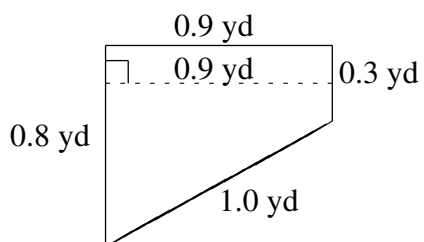
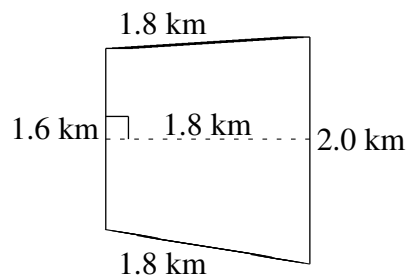
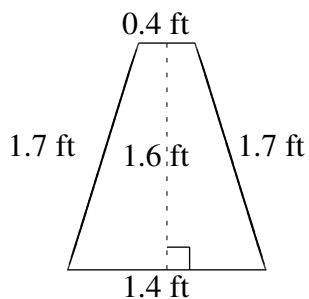
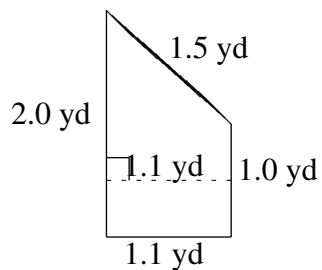
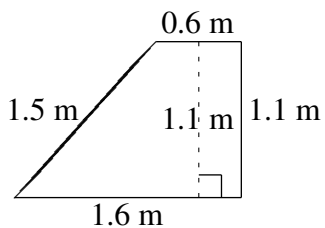


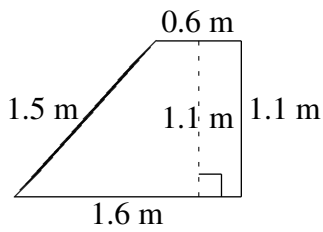
Área y Perímetro de Trapezoides (G)

Halle el área y perímetro de cada trapezoide.



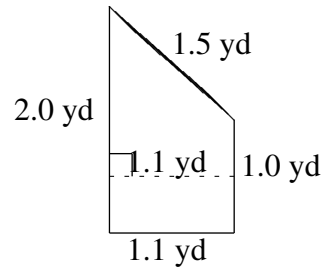
Área y Perímetro de Trapezoides (G) Respuestas

Halle el área y perímetro de cada trapezoide.



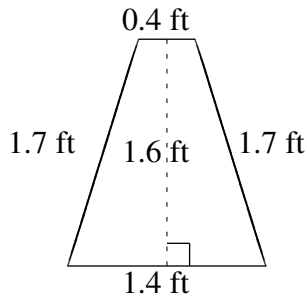
$$A = 1.21 \text{ m}^2$$

$$P = 4.8 \text{ m}$$



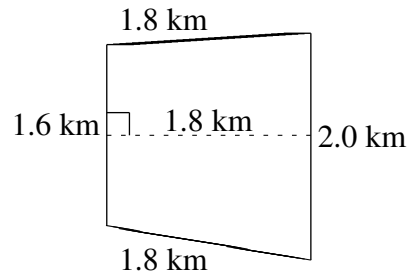
$$A = 1.65 \text{ yd}^2$$

$$P = 5.6 \text{ yd}$$



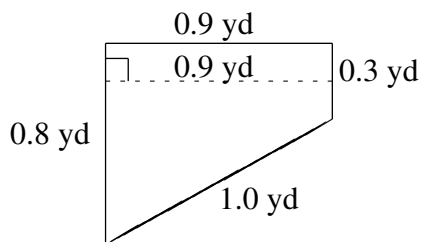
$$A = 1.44 \text{ ft}^2$$

$$P = 5.2 \text{ ft}$$



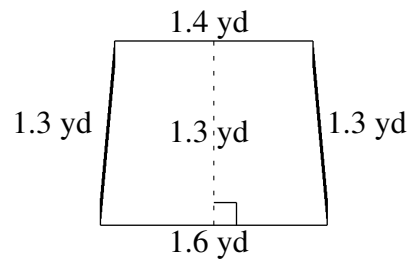
$$A = 3.24 \text{ km}^2$$

$$P = 7.2 \text{ km}$$



$$A = 0.495 \text{ yd}^2$$

$$P = 3.0 \text{ yd}$$



$$A = 1.95 \text{ yd}^2$$

$$P = 5.6 \text{ yd}$$