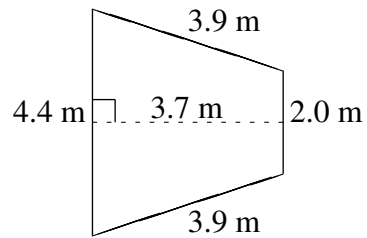
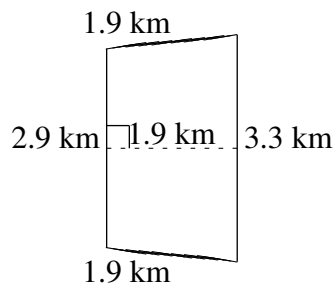
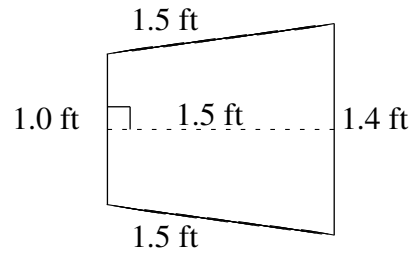
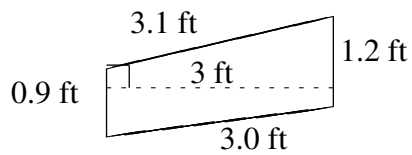
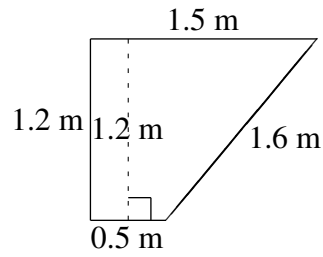
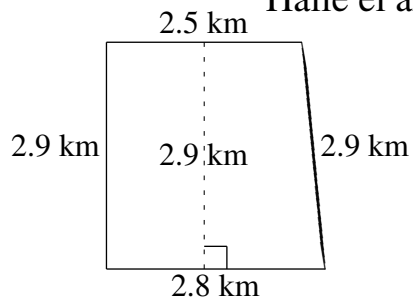


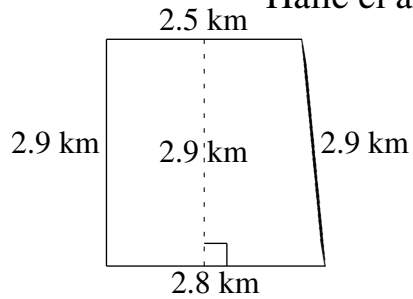
# Área y Perímetro de Trapezoides (I)

Halle el área y perímetro de cada trapezoide.



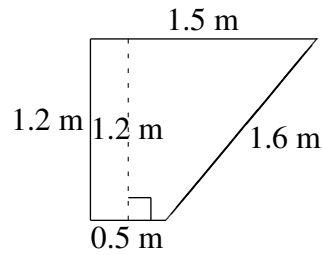
# Área y Perímetro de Trapezoides (I) Respuestas

Halle el área y perímetro de cada trapezoide.



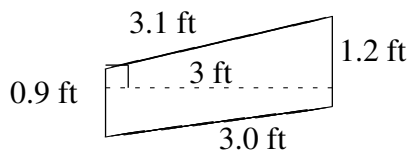
$$A = 7.685 \text{ km}^2$$

$$P = 11.1 \text{ km}$$



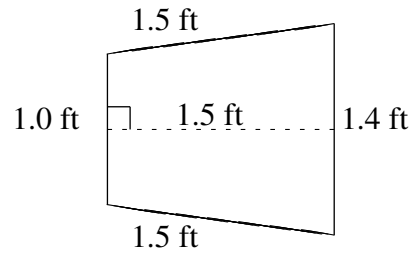
$$A = 1.20 \text{ m}^2$$

$$P = 4.8 \text{ m}$$



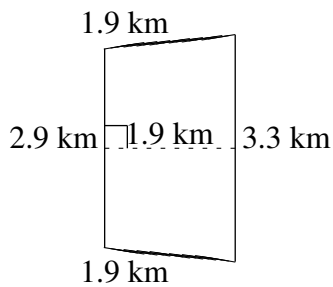
$$A = 3.15 \text{ ft}^2$$

$$P = 8.2 \text{ ft}$$



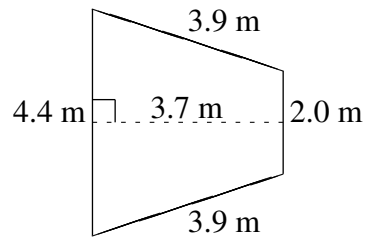
$$A = 1.80 \text{ ft}^2$$

$$P = 5.4 \text{ ft}$$



$$A = 5.89 \text{ km}^2$$

$$P = 10.0 \text{ km}$$



$$A = 11.84 \text{ m}^2$$

$$P = 14.2 \text{ m}$$