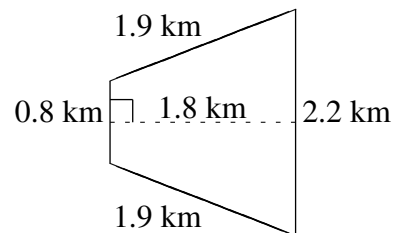
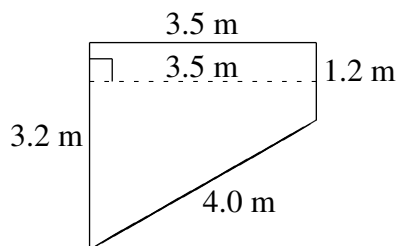
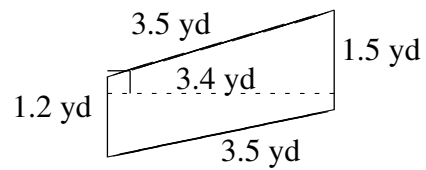
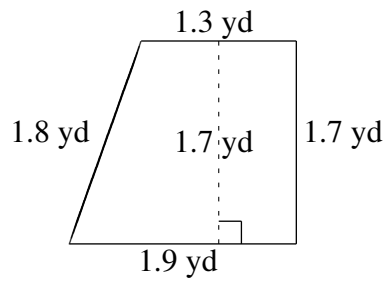
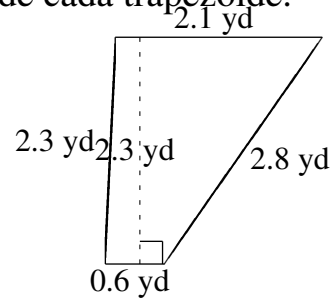
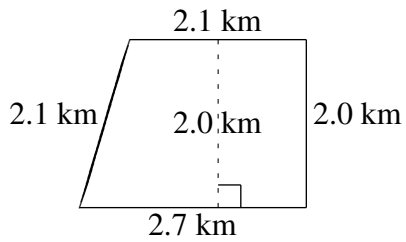


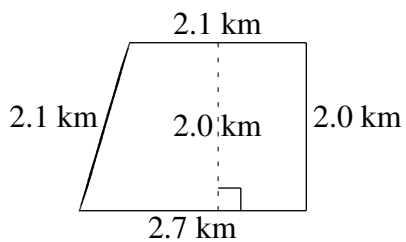
# Área y Perímetro de Trapezoides (J)

Halle el área y perímetro de cada trapezoide.



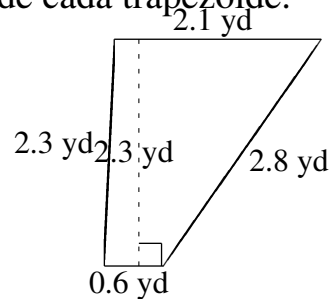
# Área y Perímetro de Trapezoides (J) Respuestas

Halle el área y perímetro de cada trapezoide.



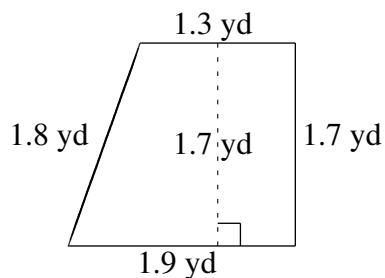
$$A = 4.80 \text{ km}^2$$

$$P = 8.9 \text{ km}$$



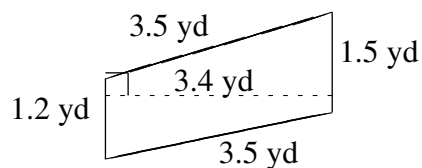
$$A = 3.105 \text{ yd}^2$$

$$P = 7.8 \text{ yd}$$



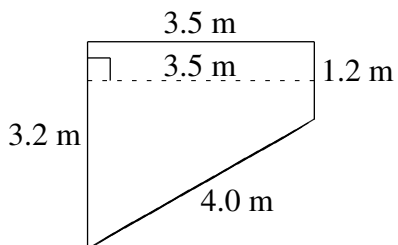
$$A = 2.72 \text{ yd}^2$$

$$P = 6.7 \text{ yd}$$



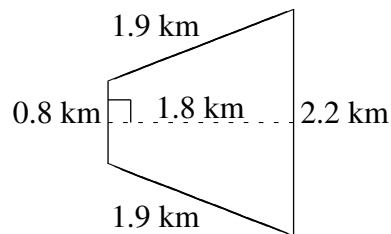
$$A = 4.59 \text{ yd}^2$$

$$P = 9.7 \text{ yd}$$



$$A = 7.70 \text{ m}^2$$

$$P = 11.9 \text{ m}$$



$$A = 2.70 \text{ km}^2$$

$$P = 6.8 \text{ km}$$