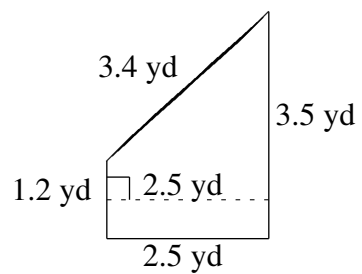
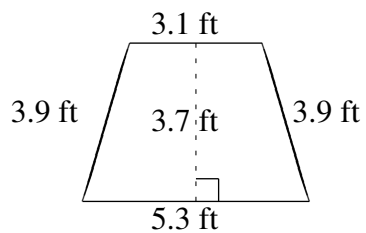
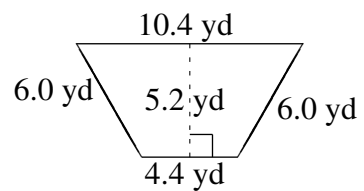
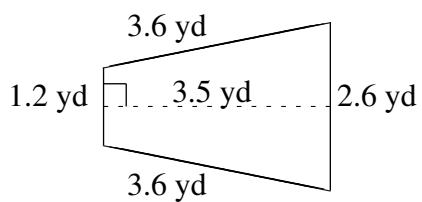
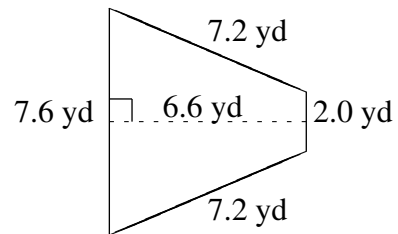
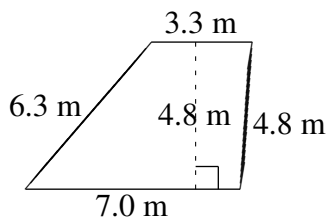


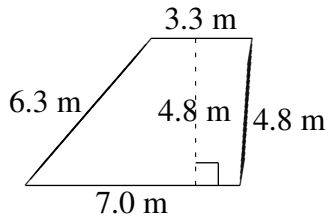
Área y Perímetro de Trapezoides (B)

Halle el área y perímetro de cada trapezoide.



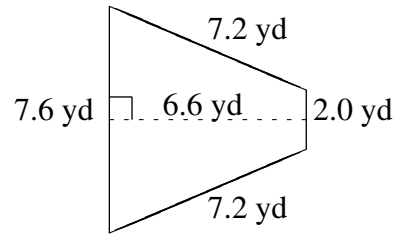
Área y Perímetro de Trapezoides (B) Respuestas

Halle el área y perímetro de cada trapezoide.



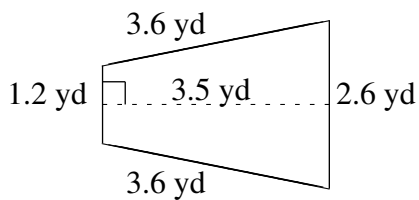
$$A = 24.72 \text{ m}^2$$

$$P = 21.4 \text{ m}$$



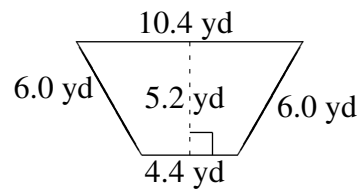
$$A = 31.68 \text{ yd}^2$$

$$P = 24.0 \text{ yd}$$



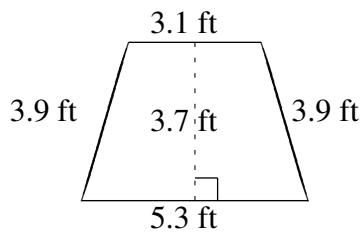
$$A = 6.65 \text{ yd}^2$$

$$P = 11.0 \text{ yd}$$



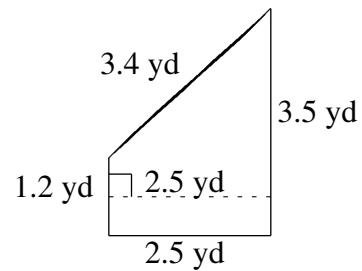
$$A = 38.48 \text{ yd}^2$$

$$P = 26.8 \text{ yd}$$



$$A = 15.54 \text{ ft}^2$$

$$P = 16.2 \text{ ft}$$



$$A = 5.875 \text{ yd}^2$$

$$P = 10.6 \text{ yd}$$