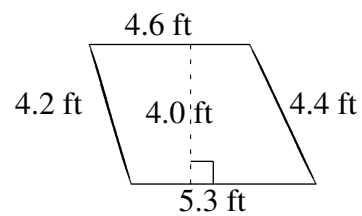
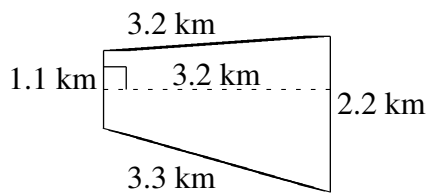
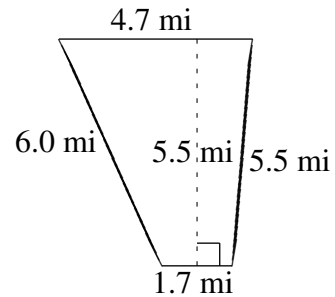
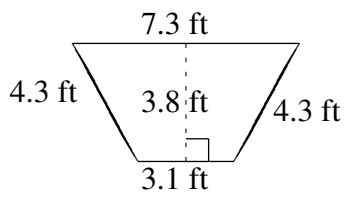
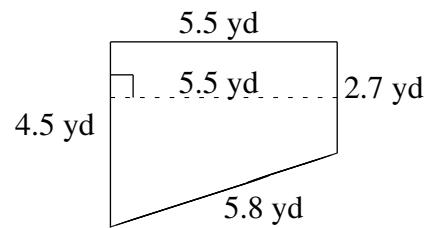
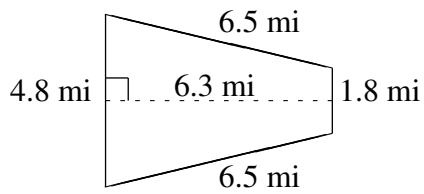


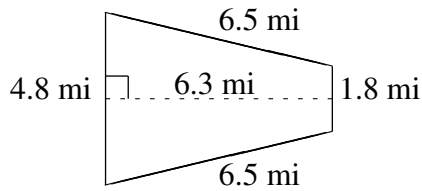
Área y Perímetro de Trapezoides (C)

Halle el área y perímetro de cada trapezoide.



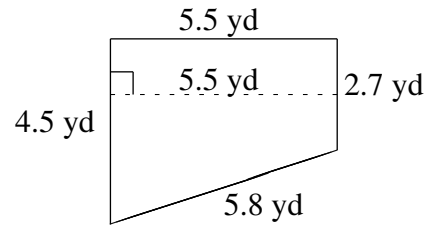
Área y Perímetro de Trapezoides (C) Respuestas

Halle el área y perímetro de cada trapezoide.



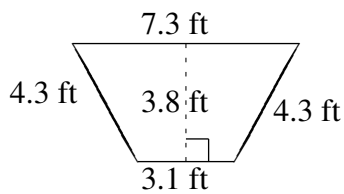
$$A = 20.79 \text{ mi}^2$$

$$P = 19.6 \text{ mi}$$



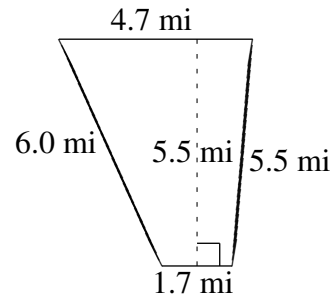
$$A = 19.80 \text{ yd}^2$$

$$P = 18.5 \text{ yd}$$



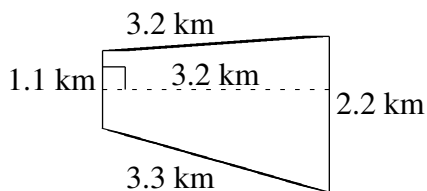
$$A = 19.76 \text{ ft}^2$$

$$P = 19.0 \text{ ft}$$



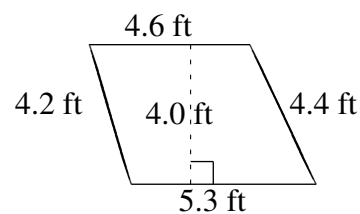
$$A = 17.60 \text{ mi}^2$$

$$P = 17.9 \text{ mi}$$



$$A = 5.28 \text{ km}^2$$

$$P = 9.8 \text{ km}$$



$$A = 19.80 \text{ ft}^2$$

$$P = 18.5 \text{ ft}$$