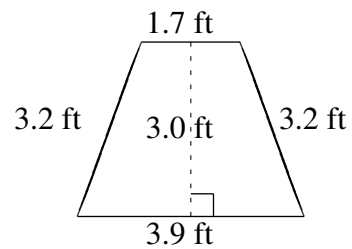
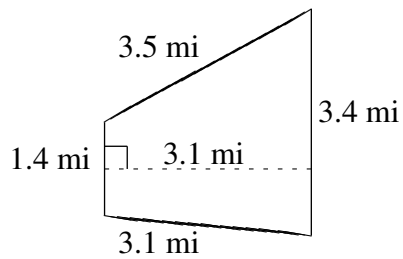
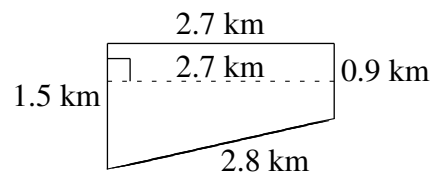
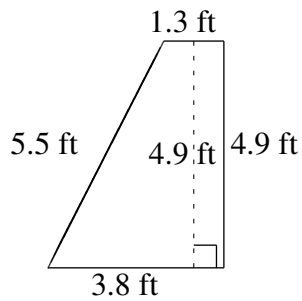
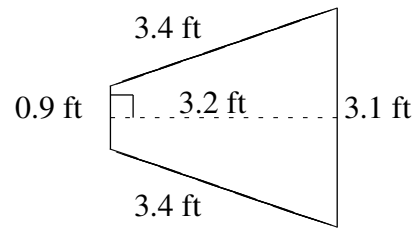
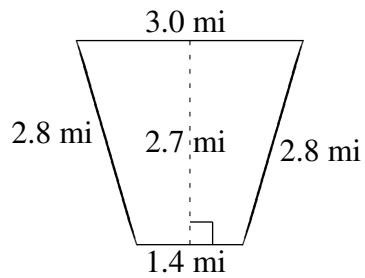


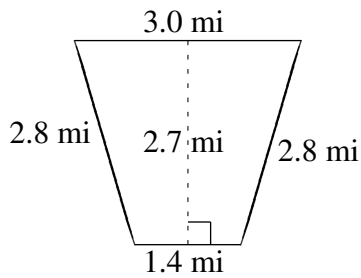
## Área y Perímetro de Trapezoides (D)

Halle el área y perímetro de cada trapezoide.

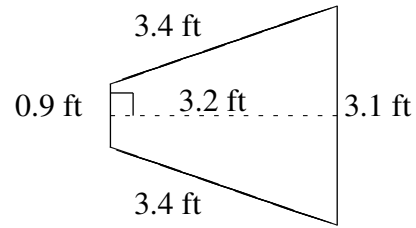


# Área y Perímetro de Trapezoides (D) Respuestas

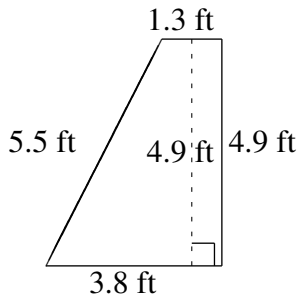
Halle el área y perímetro de cada trapezoide.



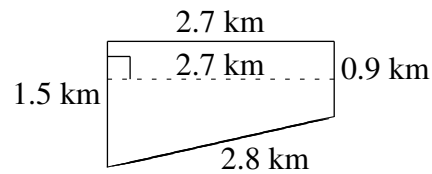
$A = 5.94 \text{ mi}^2$   
 $P = 10.0 \text{ mi}$



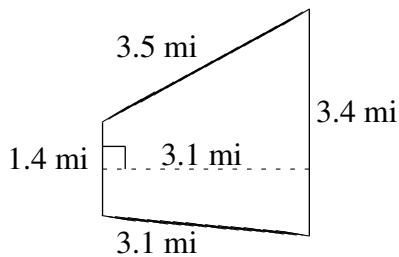
$A = 6.40 \text{ ft}^2$   
 $P = 10.8 \text{ ft}$



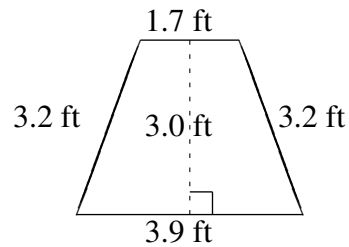
$A = 12.495 \text{ ft}^2$   
 $P = 15.5 \text{ ft}$



$A = 3.24 \text{ km}^2$   
 $P = 7.9 \text{ km}$



$A = 7.44 \text{ mi}^2$   
 $P = 11.4 \text{ mi}$



$A = 8.40 \text{ ft}^2$   
 $P = 12.0 \text{ ft}$