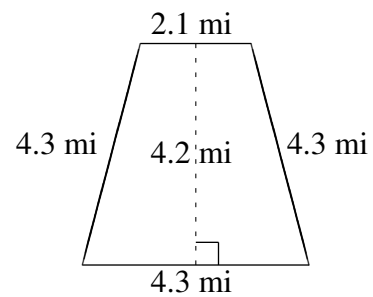
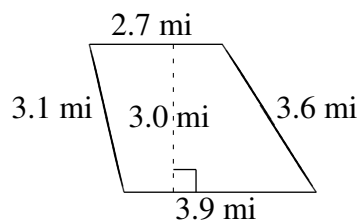
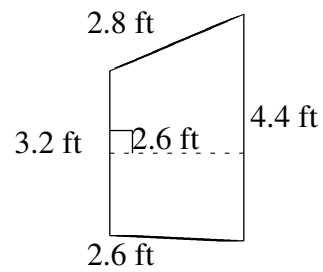
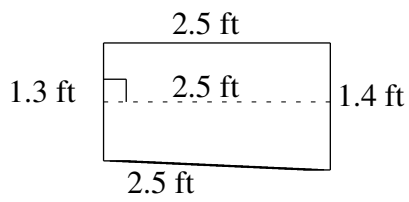
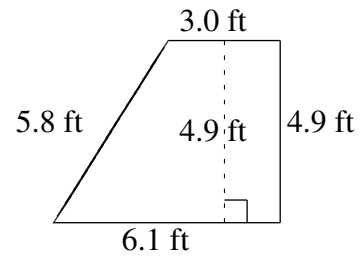
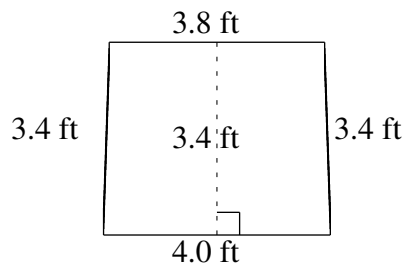


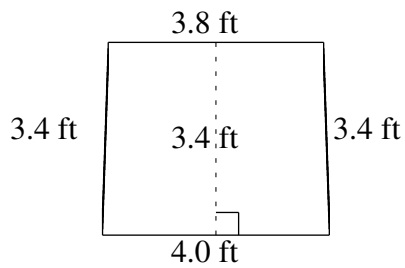
Área y Perímetro de Trapezoides (E)

Halle el área y perímetro de cada trapezoide.

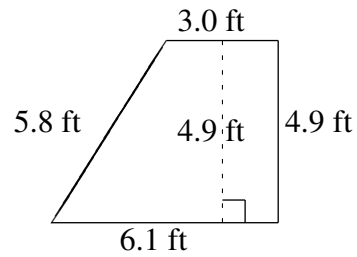


Área y Perímetro de Trapezoides (E) Respuestas

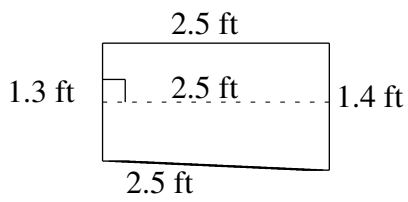
Halle el área y perímetro de cada trapezoide.



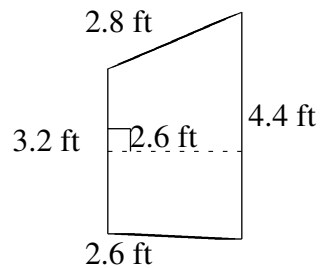
$$A = 13.26 \text{ ft}^2$$
$$P = 14.6 \text{ ft}$$



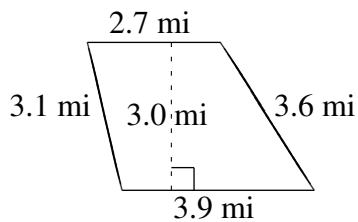
$$A = 22.295 \text{ ft}^2$$
$$P = 19.8 \text{ ft}$$



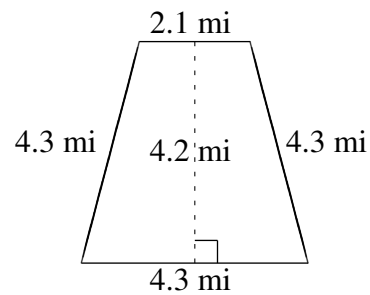
$$A = 3.375 \text{ ft}^2$$
$$P = 7.7 \text{ ft}$$



$$A = 9.88 \text{ ft}^2$$
$$P = 13.0 \text{ ft}$$



$$A = 9.90 \text{ mi}^2$$
$$P = 13.3 \text{ mi}$$



$$A = 13.44 \text{ mi}^2$$
$$P = 15.0 \text{ mi}$$