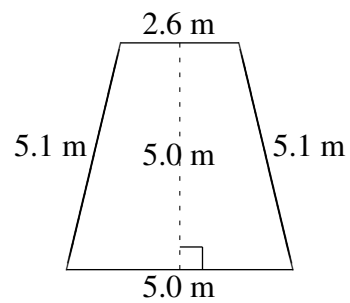
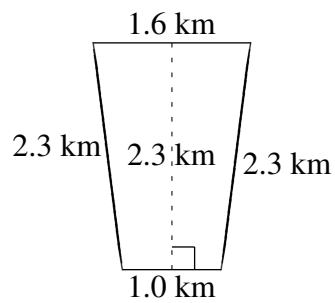
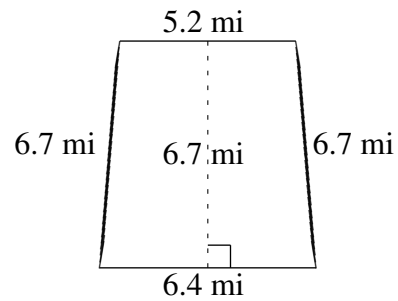
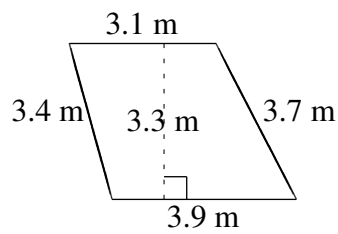
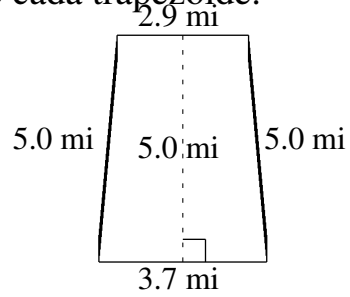
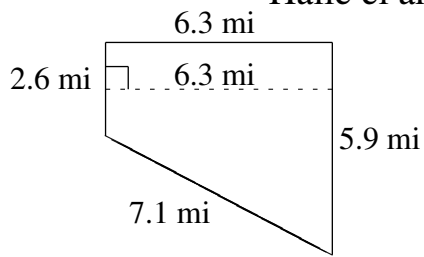


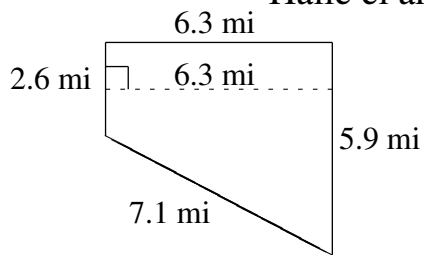
Área y Perímetro de Trapezoides (F)

Halle el área y perímetro de cada trapezoide.



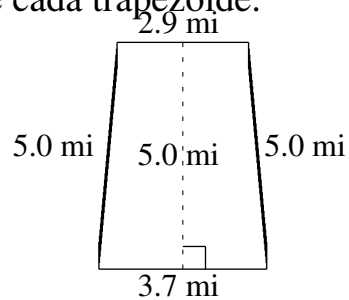
Área y Perímetro de Trapezoides (F) Respuestas

Halle el área y perímetro de cada trapezoide.



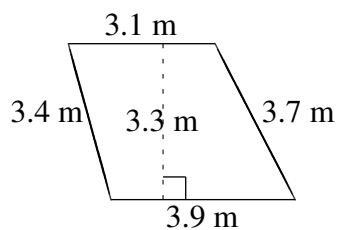
$$A = 26.775 \text{ mi}^2$$

$$P = 21.9 \text{ mi}$$



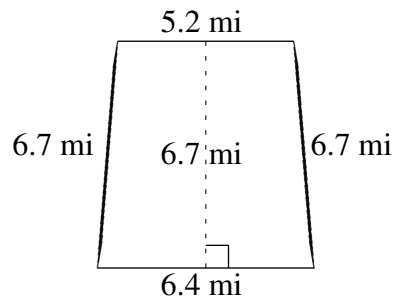
$$A = 16.50 \text{ mi}^2$$

$$P = 16.6 \text{ mi}$$



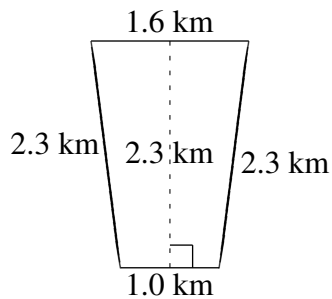
$$A = 11.55 \text{ m}^2$$

$$P = 14.1 \text{ m}$$



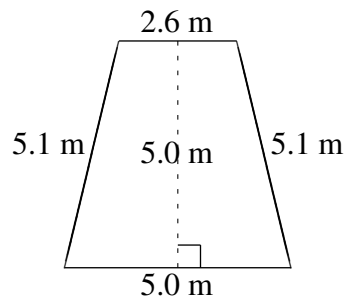
$$A = 38.86 \text{ mi}^2$$

$$P = 25.0 \text{ mi}$$



$$A = 2.99 \text{ km}^2$$

$$P = 7.2 \text{ km}$$



$$A = 19.00 \text{ m}^2$$

$$P = 17.8 \text{ m}$$