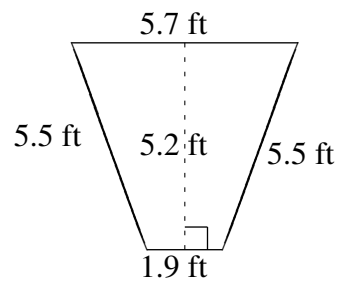
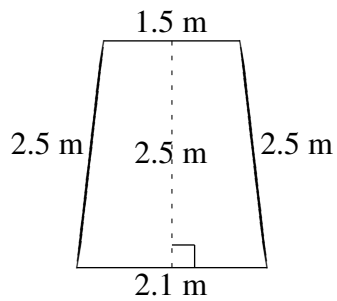
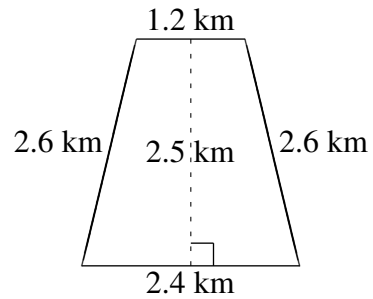
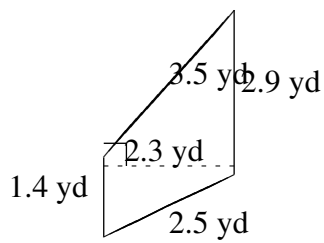
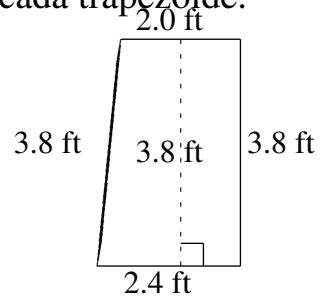
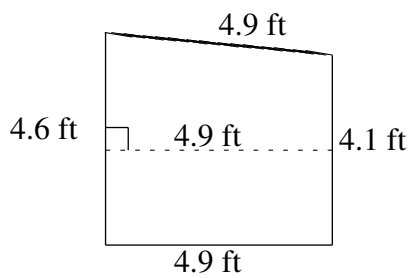


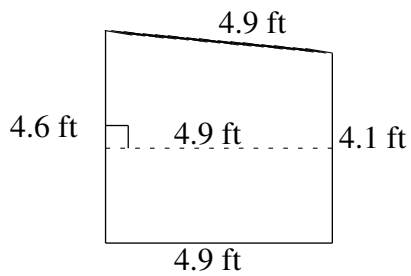
Área y Perímetro de Trapezoides (G)

Halle el área y perímetro de cada trapezoide.



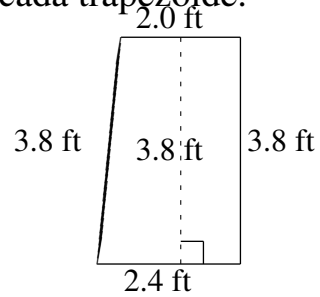
Área y Perímetro de Trapezoides (G) Respuestas

Halle el área y perímetro de cada trapezoide.



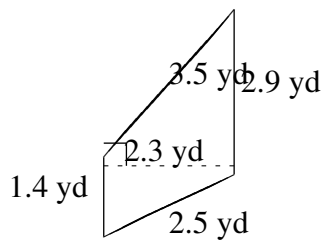
$$A = 21.315 \text{ ft}^2$$

$$P = 18.5 \text{ ft}$$



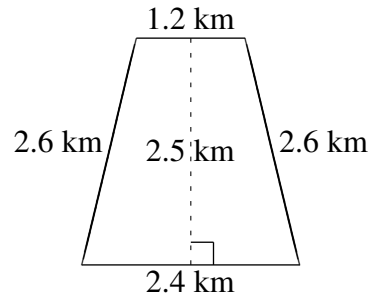
$$A = 8.36 \text{ ft}^2$$

$$P = 12.0 \text{ ft}$$



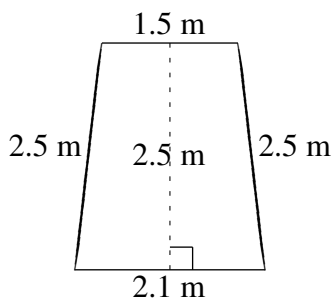
$$A = 4.945 \text{ yd}^2$$

$$P = 10.3 \text{ yd}$$



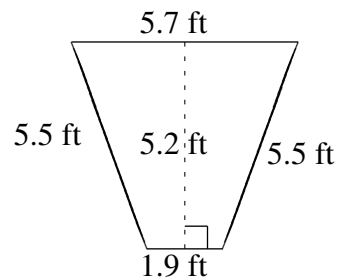
$$A = 4.50 \text{ km}^2$$

$$P = 8.8 \text{ km}$$



$$A = 4.50 \text{ m}^2$$

$$P = 8.6 \text{ m}$$



$$A = 19.76 \text{ ft}^2$$

$$P = 18.6 \text{ ft}$$