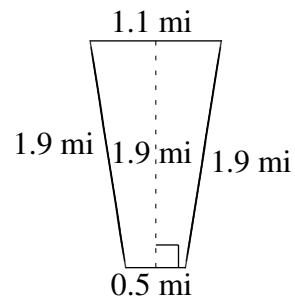
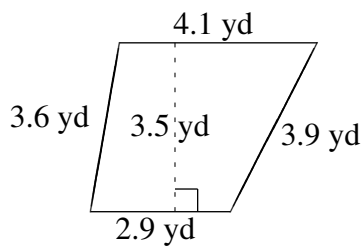
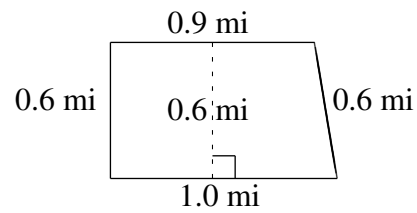
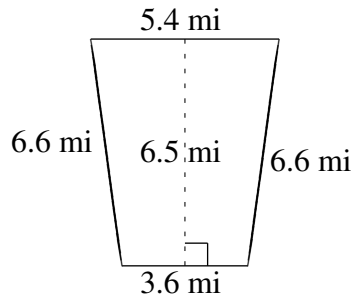
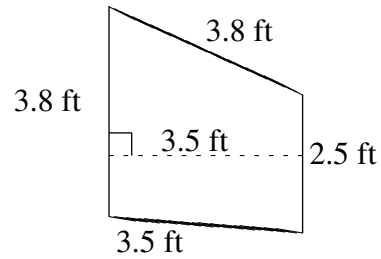
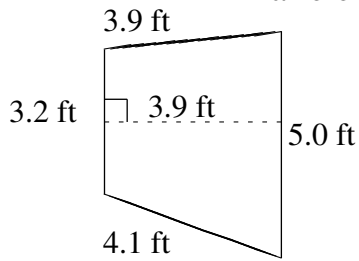


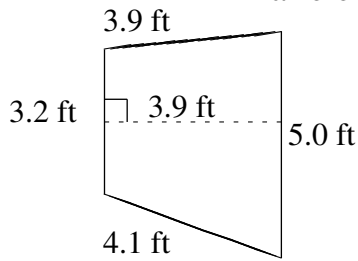
Área y Perímetro de Trapezoides (H)

Halle el área y perímetro de cada trapezoide.



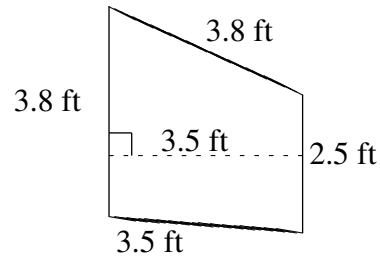
Área y Perímetro de Trapezoides (H) Respuestas

Halle el área y perímetro de cada trapezoide.



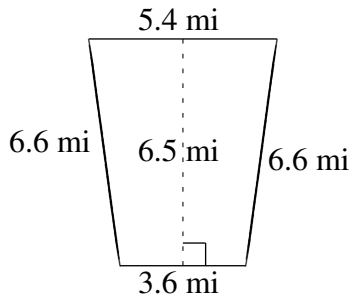
$$A = 15.99 \text{ ft}^2$$

$$P = 16.2 \text{ ft}$$



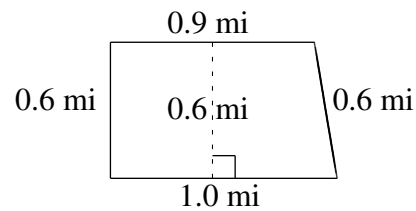
$$A = 11.025 \text{ ft}^2$$

$$P = 13.6 \text{ ft}$$



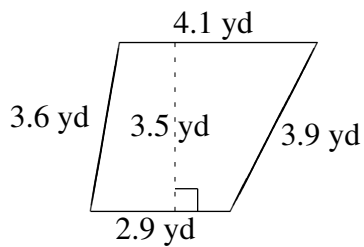
$$A = 29.25 \text{ mi}^2$$

$$P = 22.2 \text{ mi}$$



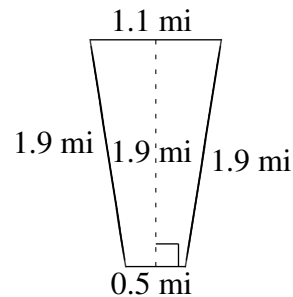
$$A = 0.57 \text{ mi}^2$$

$$P = 3.1 \text{ mi}$$



$$A = 12.25 \text{ yd}^2$$

$$P = 14.5 \text{ yd}$$



$$A = 1.52 \text{ mi}^2$$

$$P = 5.4 \text{ mi}$$