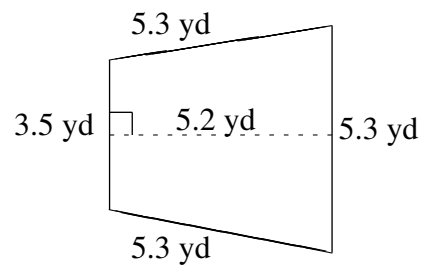
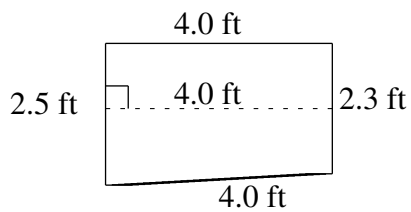
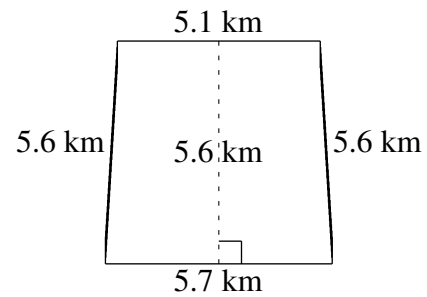
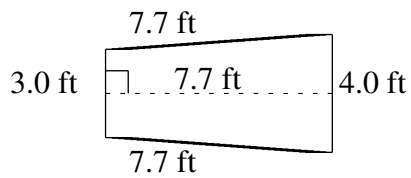
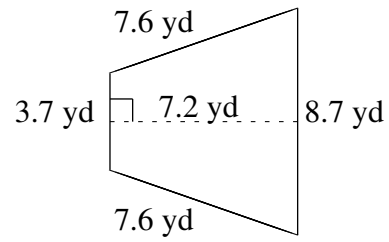
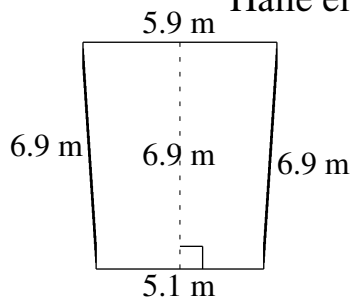


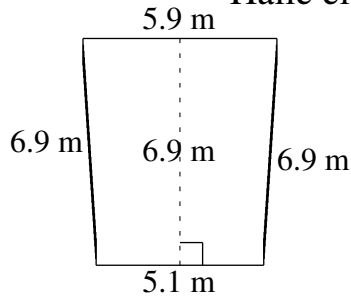
Área y Perímetro de Trapezoides (J)

Halle el área y perímetro de cada trapezoide.



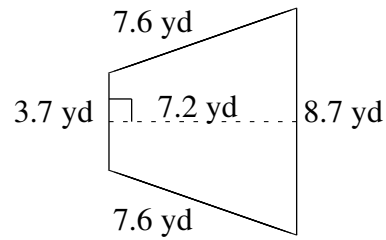
Área y Perímetro de Trapezoides (J) Respuestas

Halle el área y perímetro de cada trapezoide.




$$A = 37.95 \text{ m}^2$$

$$P = 24.8 \text{ m}$$



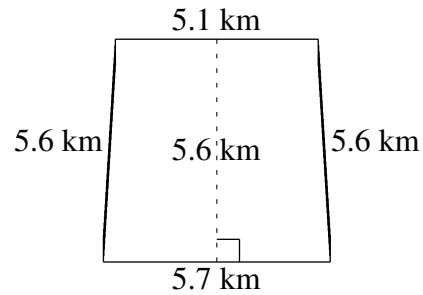
$$A = 44.64 \text{ yd}^2$$

$$P = 27.6 \text{ yd}$$



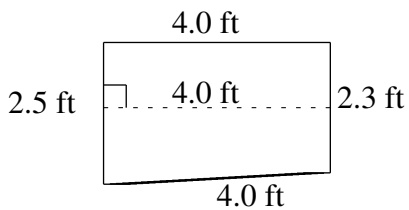
$$A = 26.95 \text{ ft}^2$$

$$P = 22.4 \text{ ft}$$



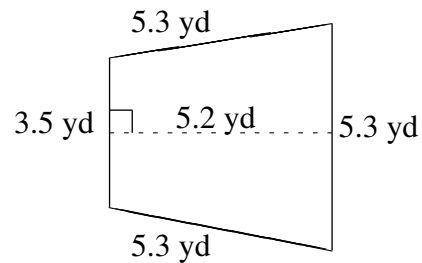
$$A = 30.24 \text{ km}^2$$

$$P = 22.0 \text{ km}$$



$$A = 9.60 \text{ ft}^2$$

$$P = 12.8 \text{ ft}$$



$$A = 22.88 \text{ yd}^2$$

$$P = 19.4 \text{ yd}$$