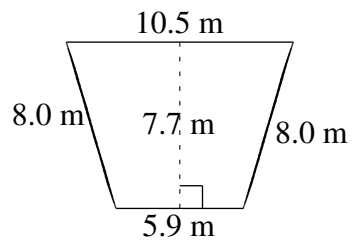
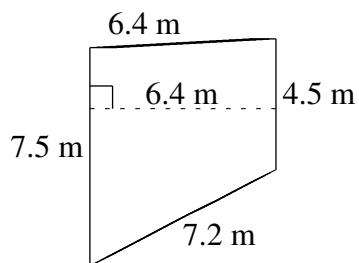
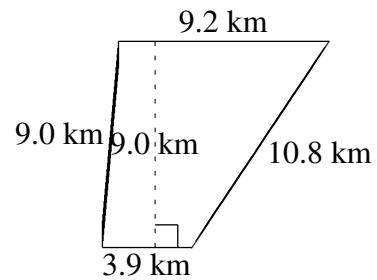
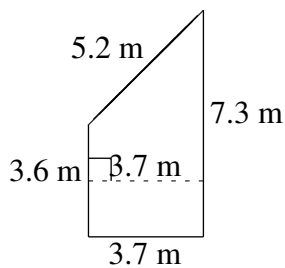
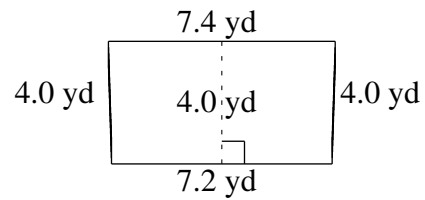
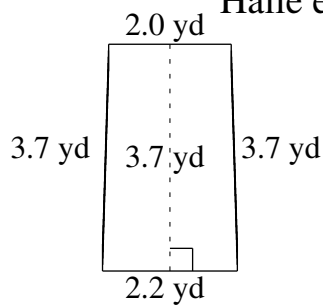


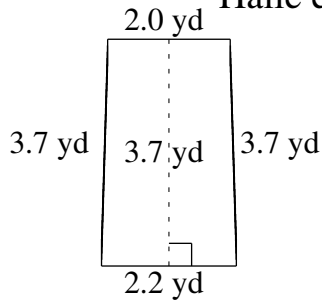
# Área y Perímetro de Trapezoides (A)

Halle el área y perímetro de cada trapezoide.



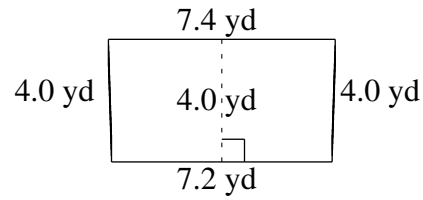
# Área y Perímetro de Trapezoides (A) Respuestas

Halle el área y perímetro de cada trapezoide.



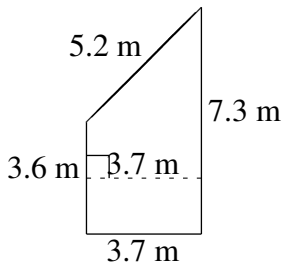
$$A = 7.77 \text{ yd}^2$$

$$P = 11.6 \text{ yd}$$



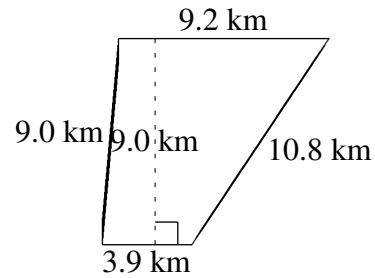
$$A = 29.20 \text{ yd}^2$$

$$P = 22.6 \text{ yd}$$



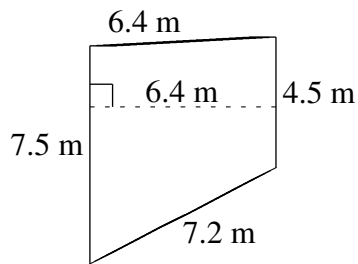
$$A = 20.165 \text{ m}^2$$

$$P = 19.8 \text{ m}$$



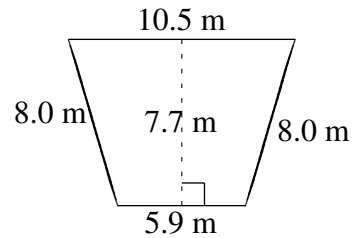
$$A = 58.95 \text{ km}^2$$

$$P = 32.9 \text{ km}$$



$$A = 38.40 \text{ m}^2$$

$$P = 25.6 \text{ m}$$



$$A = 63.14 \text{ m}^2$$

$$P = 32.4 \text{ m}$$