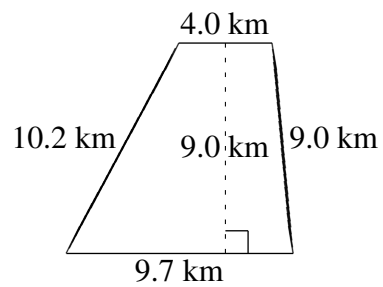

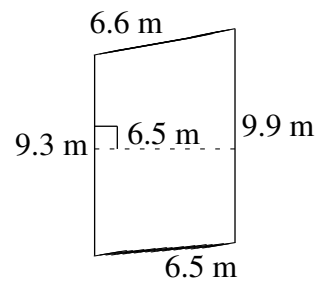
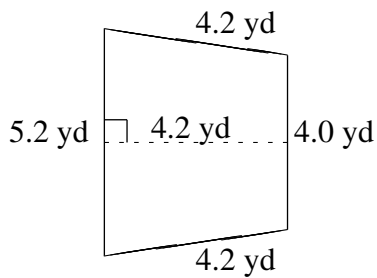
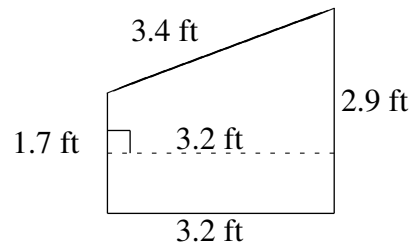
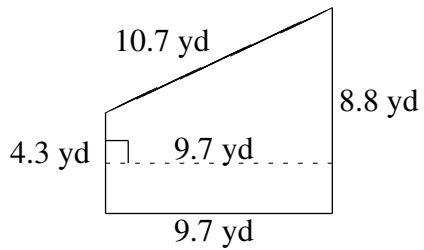


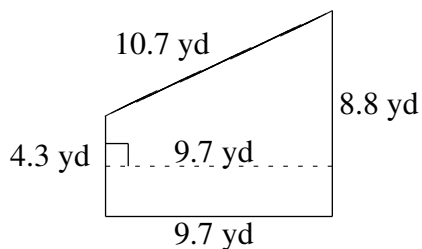
# Área y Perímetro de Trapezoides (I)

Halle el área y perímetro de cada trapezoide.

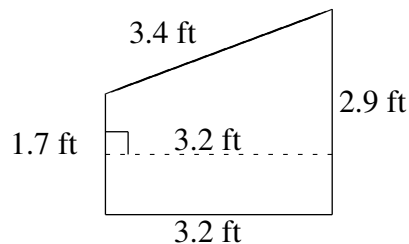


# Área y Perímetro de Trapezoides (I) Respuestas

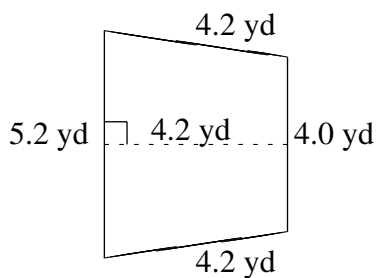
Halle el área y perímetro de cada trapezoide.



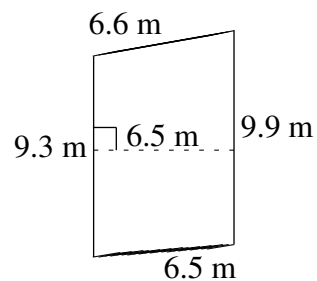
$$A = 63.535 \text{ yd}^2$$
$$P = 33.5 \text{ yd}$$



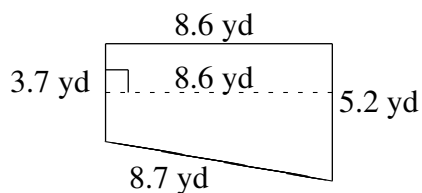
$$A = 7.36 \text{ ft}^2$$
$$P = 11.2 \text{ ft}$$



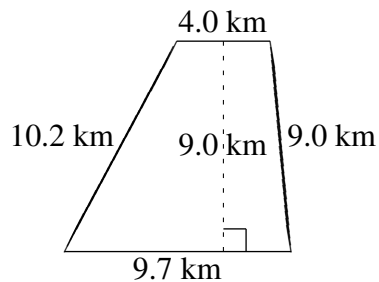
$$A = 19.32 \text{ yd}^2$$
$$P = 17.6 \text{ yd}$$



$$A = 62.40 \text{ m}^2$$
$$P = 32.3 \text{ m}$$



$$A = 38.27 \text{ yd}^2$$
$$P = 26.2 \text{ yd}$$



$$A = 61.65 \text{ km}^2$$
$$P = 32.9 \text{ km}$$