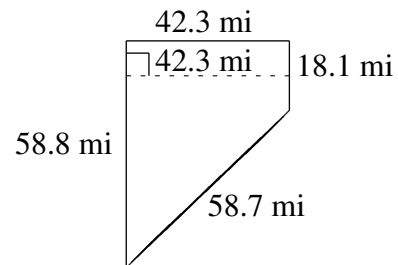
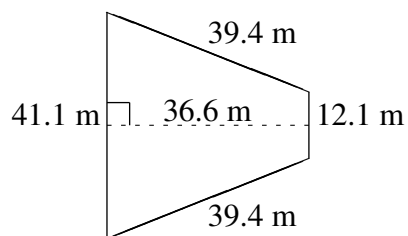
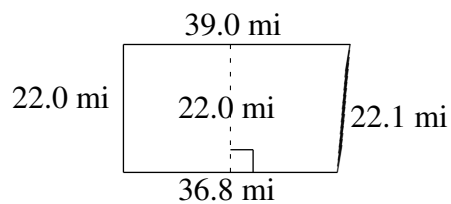
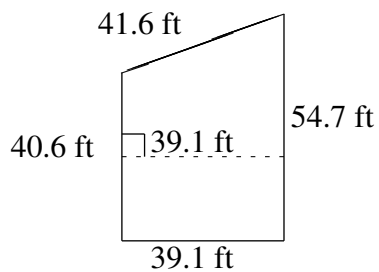
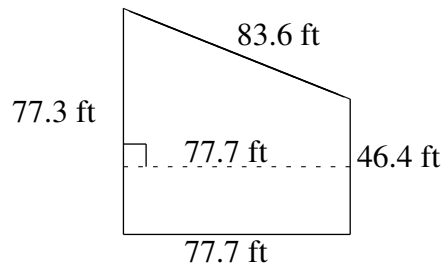
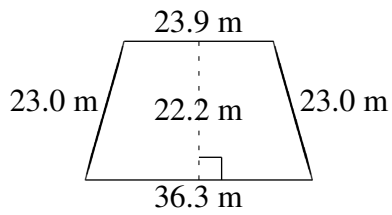


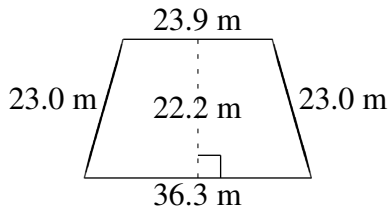
Área y Perímetro de Trapezoides (B)

Halle el área y perímetro de cada trapezoide.



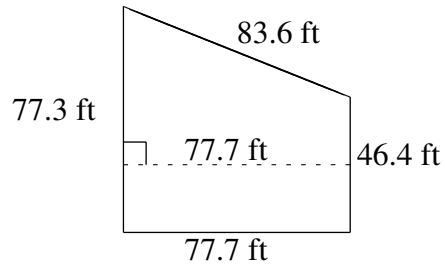
Área y Perímetro de Trapezoides (B) Respuestas

Halle el área y perímetro de cada trapezoide.



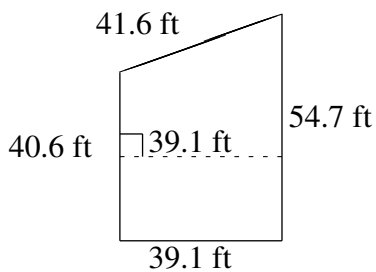
$$A = 668.22 \text{ m}^2$$

$$P = 106.2 \text{ m}$$



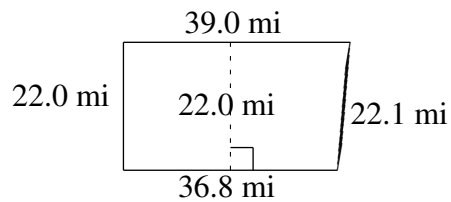
$$A = 4805.745 \text{ ft}^2$$

$$P = 285.0 \text{ ft}$$



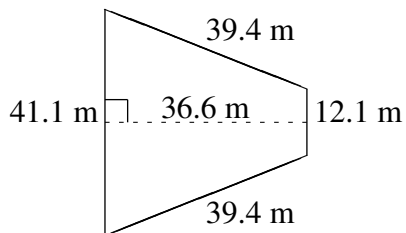
$$A = 1863.115 \text{ ft}^2$$

$$P = 176.0 \text{ ft}$$



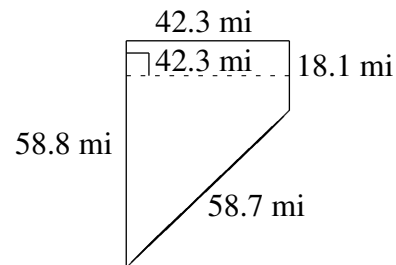
$$A = 833.80 \text{ mi}^2$$

$$P = 119.9 \text{ mi}$$



$$A = 973.56 \text{ m}^2$$

$$P = 132.0 \text{ m}$$



$$A = 1626.435 \text{ mi}^2$$

$$P = 177.9 \text{ mi}$$