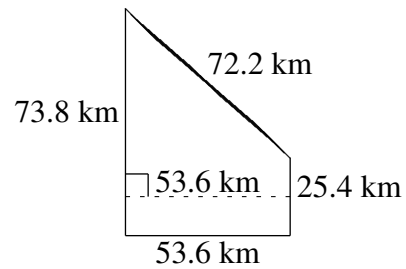
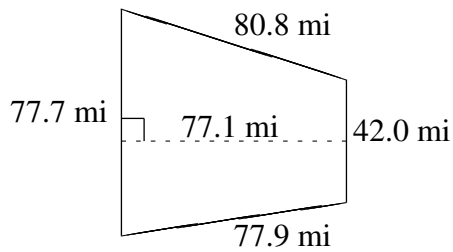
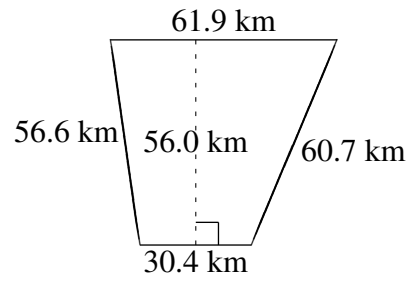
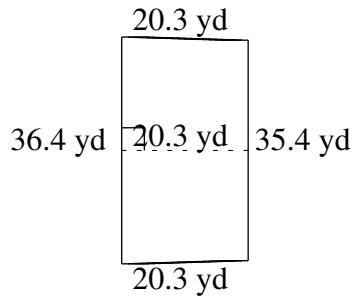
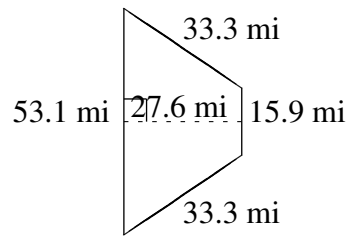
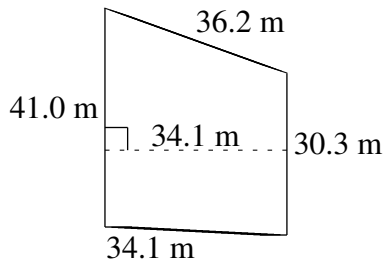


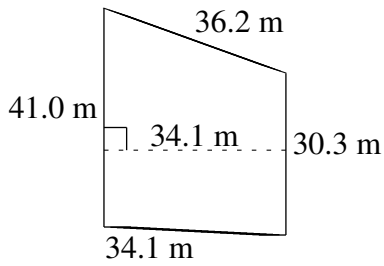
Área y Perímetro de Trapezoides (C)

Halle el área y perímetro de cada trapezoide.



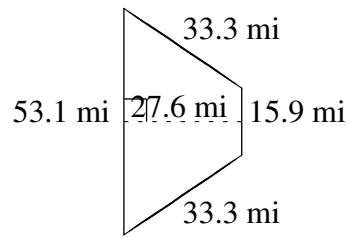
Área y Perímetro de Trapezoides (C) Respuestas

Halle el área y perímetro de cada trapezoide.



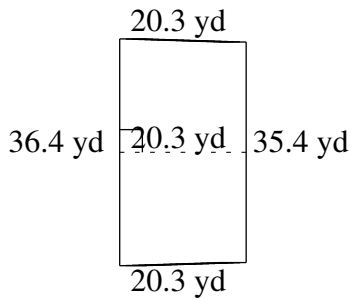
$$A = 1215.665 \text{ m}^2$$

$$P = 141.6 \text{ m}$$



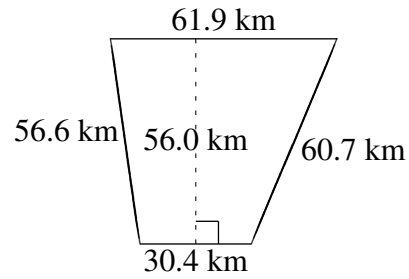
$$A = 952.20 \text{ mi}^2$$

$$P = 135.6 \text{ mi}$$



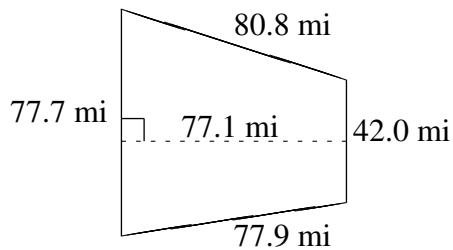
$$A = 728.77 \text{ yd}^2$$

$$P = 112.4 \text{ yd}$$



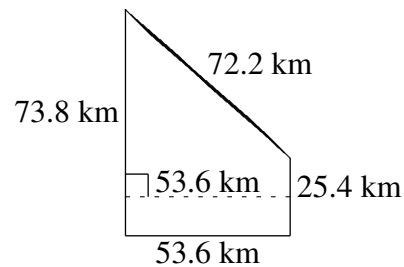
$$A = 2584.40 \text{ km}^2$$

$$P = 209.6 \text{ km}$$



$$A = 4614.435 \text{ mi}^2$$

$$P = 278.4 \text{ mi}$$



$$A = 2658.56 \text{ km}^2$$

$$P = 225.0 \text{ km}$$