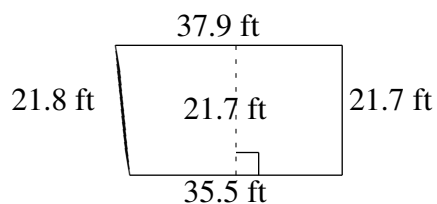
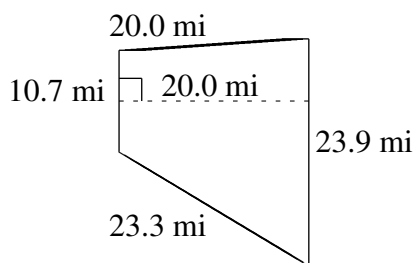
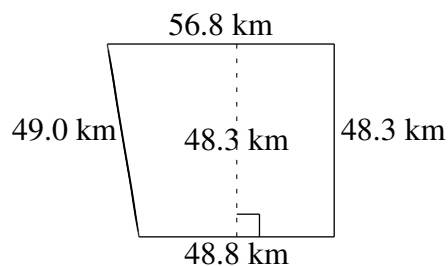
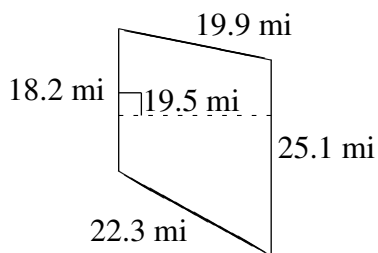
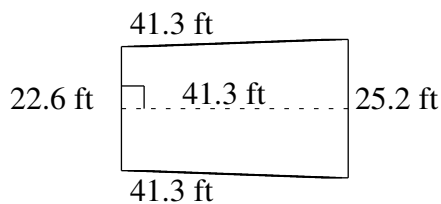
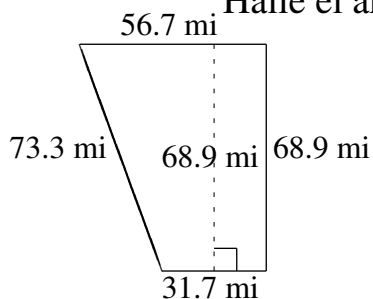


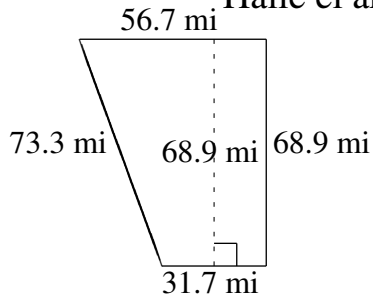
Área y Perímetro de Trapezoides (D)

Halle el área y perímetro de cada trapezoide.



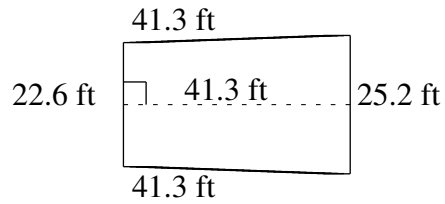
Área y Perímetro de Trapezoides (D) Respuestas

Halle el área y perímetro de cada trapezoide.



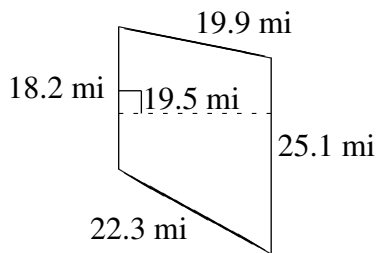
$$A = 3045.38 \text{ mi}^2$$

$$P = 230.6 \text{ mi}$$



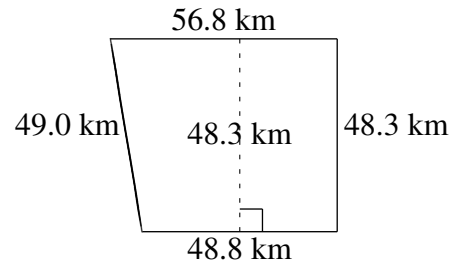
$$A = 987.07 \text{ ft}^2$$

$$P = 130.4 \text{ ft}$$



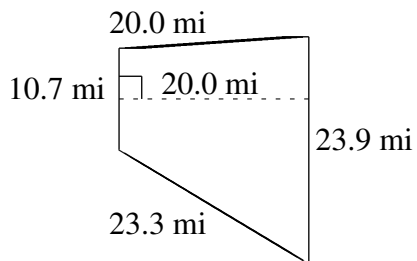
$$A = 422.175 \text{ mi}^2$$

$$P = 85.5 \text{ mi}$$



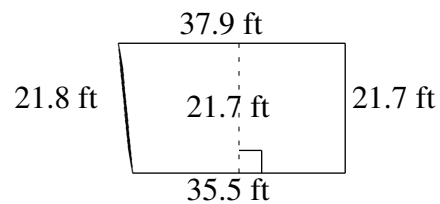
$$A = 2550.24 \text{ km}^2$$

$$P = 202.9 \text{ km}$$



$$A = 346.00 \text{ mi}^2$$

$$P = 77.9 \text{ mi}$$



$$A = 796.39 \text{ ft}^2$$

$$P = 116.9 \text{ ft}$$