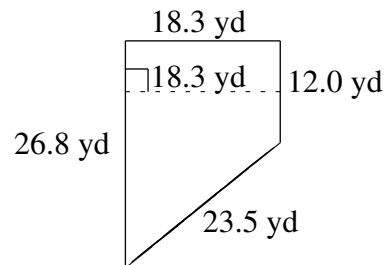
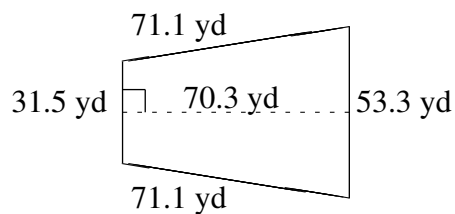
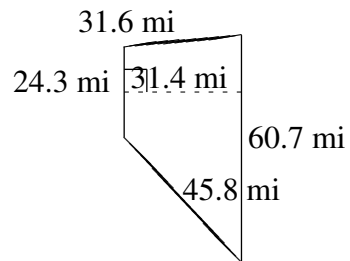
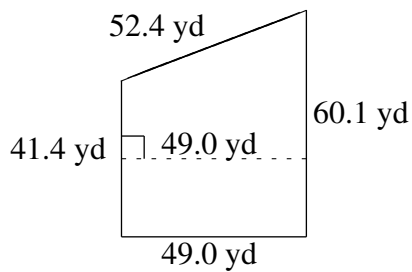
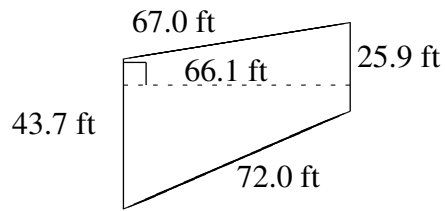
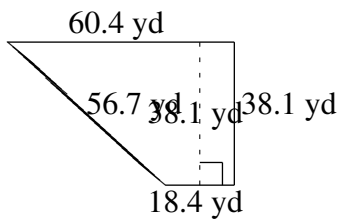


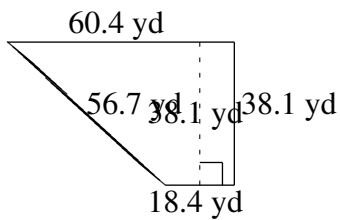
# Área y Perímetro de Trapezoides (E)

Halle el área y perímetro de cada trapezoide.



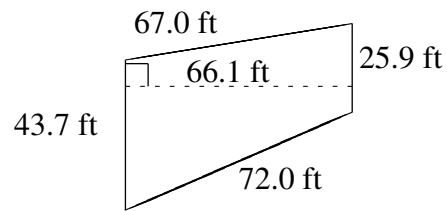
# Área y Perímetro de Trapezoides (E) Respuestas

Halle el área y perímetro de cada trapezoide.



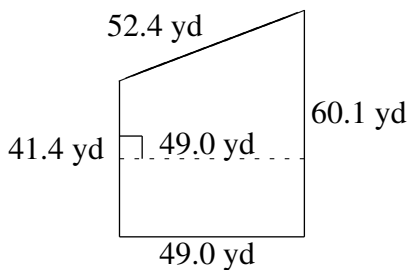
$$A = 1501.14 \text{ yd}^2$$

$$P = 173.6 \text{ yd}$$



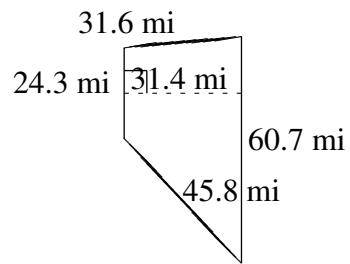
$$A = 2300.28 \text{ ft}^2$$

$$P = 208.6 \text{ ft}$$



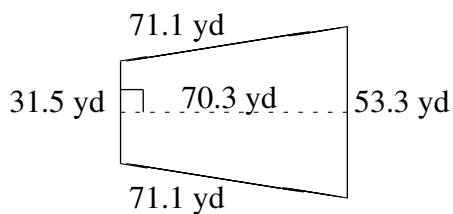
$$A = 2486.75 \text{ yd}^2$$

$$P = 202.9 \text{ yd}$$



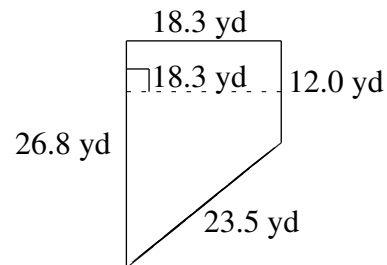
$$A = 1334.50 \text{ mi}^2$$

$$P = 162.4 \text{ mi}$$



$$A = 2980.72 \text{ yd}^2$$

$$P = 227.0 \text{ yd}$$



$$A = 355.02 \text{ yd}^2$$

$$P = 80.6 \text{ yd}$$