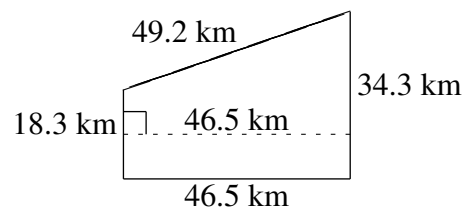
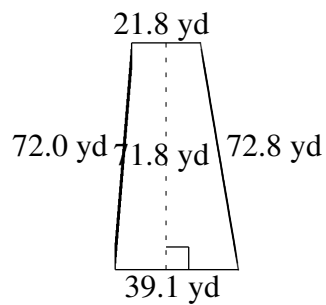
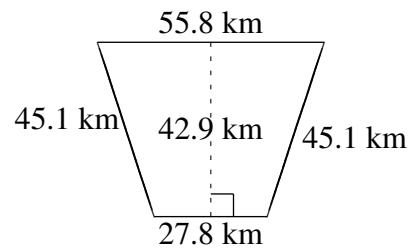
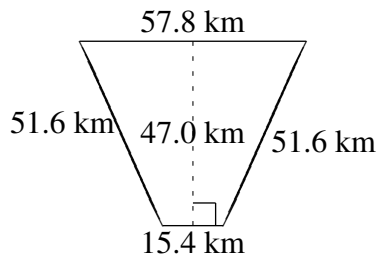
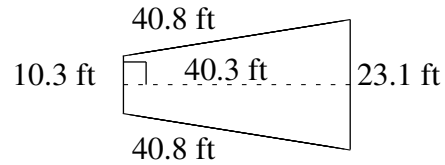
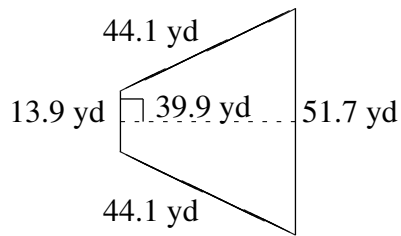


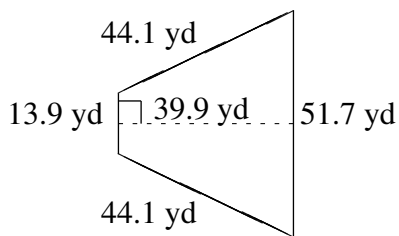
Área y Perímetro de Trapezoides (H)

Halle el área y perímetro de cada trapezoide.



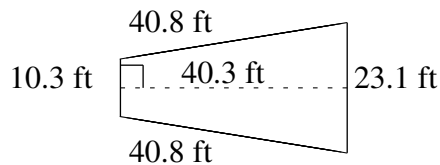
Área y Perímetro de Trapezoides (H) Respuestas

Halle el área y perímetro de cada trapezoide.



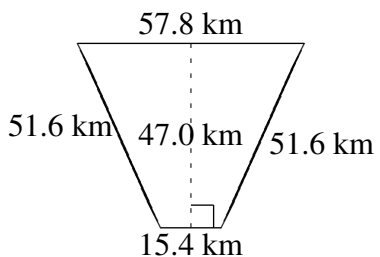
$$A = 1308.72 \text{ yd}^2$$

$$P = 153.8 \text{ yd}$$



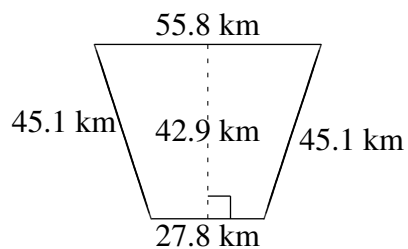
$$A = 673.01 \text{ ft}^2$$

$$P = 115.0 \text{ ft}$$



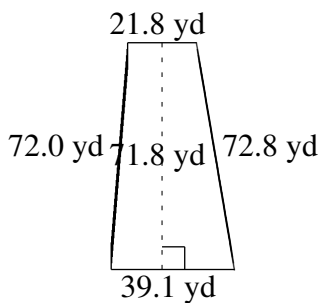
$$A = 1720.20 \text{ km}^2$$

$$P = 176.4 \text{ km}$$



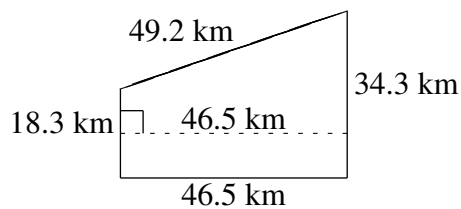
$$A = 1793.22 \text{ km}^2$$

$$P = 173.8 \text{ km}$$



$$A = 2186.31 \text{ yd}^2$$

$$P = 205.7 \text{ yd}$$



$$A = 1222.95 \text{ km}^2$$

$$P = 148.3 \text{ km}$$