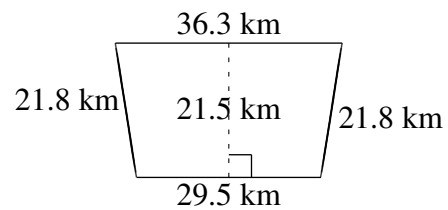
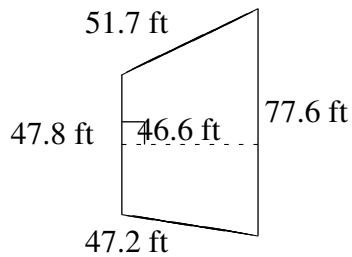
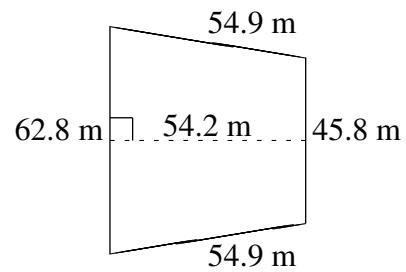
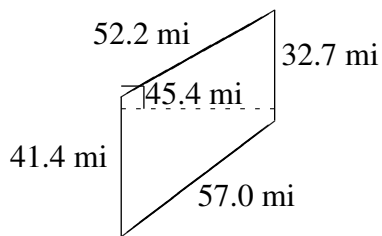
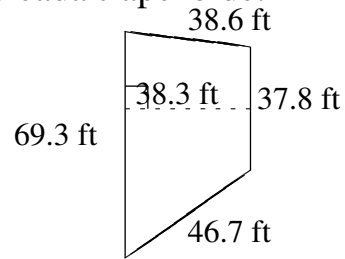
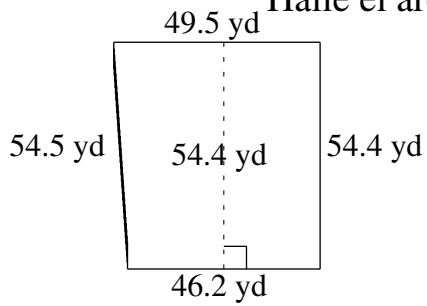


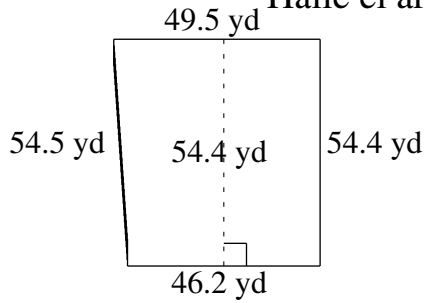
# Área y Perímetro de Trapezoides (I)

Halle el área y perímetro de cada trapezoide.



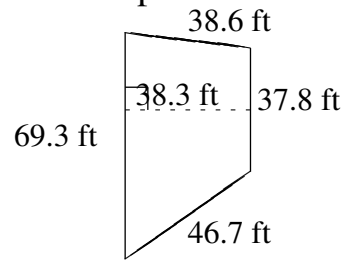
# Área y Perímetro de Trapezoides (I) Respuestas

Halle el área y perímetro de cada trapezoide.



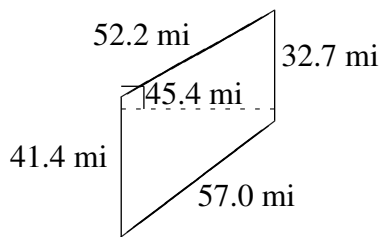
$$A = 2603.04 \text{ yd}^2$$

$$P = 204.6 \text{ yd}$$



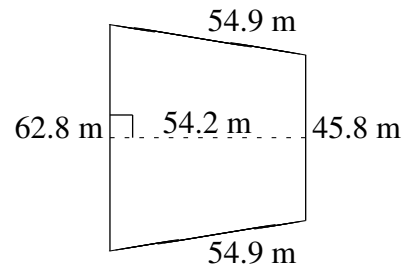
$$A = 2050.965 \text{ ft}^2$$

$$P = 192.4 \text{ ft}$$



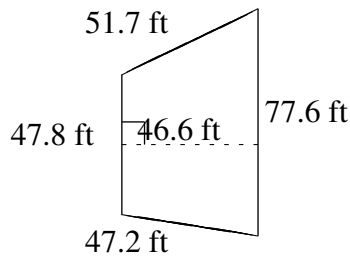
$$A = 1682.07 \text{ mi}^2$$

$$P = 183.3 \text{ mi}$$



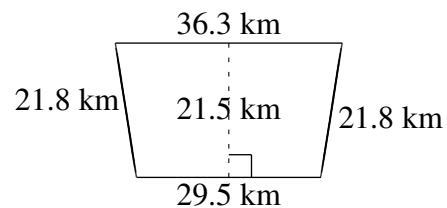
$$A = 2943.06 \text{ m}^2$$

$$P = 218.4 \text{ m}$$



$$A = 2921.82 \text{ ft}^2$$

$$P = 224.3 \text{ ft}$$



$$A = 707.35 \text{ km}^2$$

$$P = 109.4 \text{ km}$$