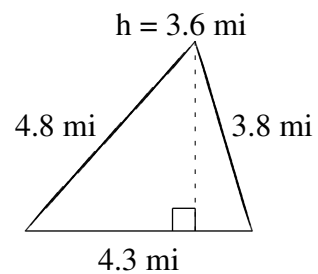
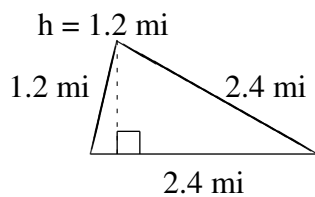
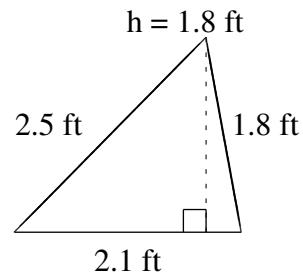
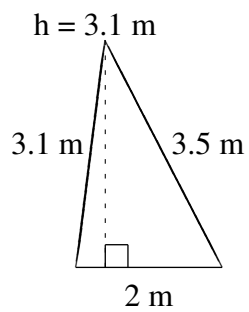
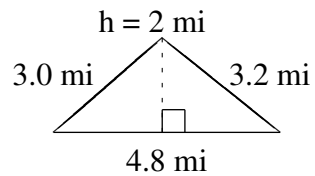
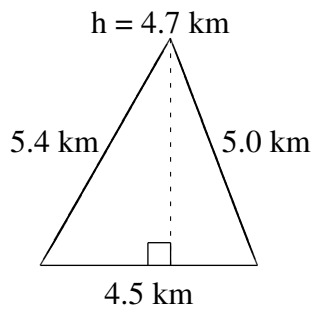


Área y Perímetro de Triángulos (G)

Halle el área y el perímetro de cada triángulo.



Área y Perímetro de Triángulos (G) Respuestas

Halle el área y el perímetro de cada triángulo.

