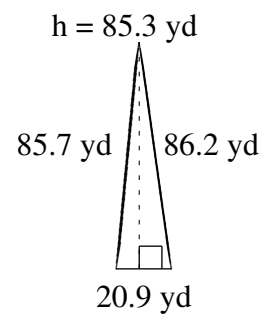
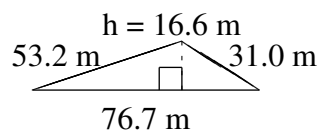
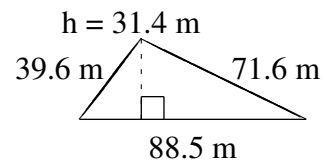
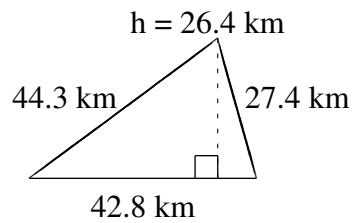
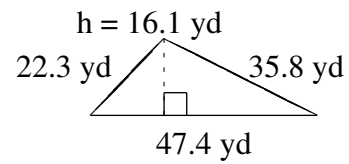
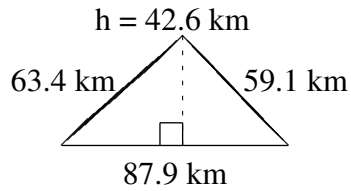


Área y Perímetro de Triángulos (C)

Halle el área y el perímetro de cada triángulo.



Área y Perímetro de Triángulos (C) Respuestas

Halle el área y el perímetro de cada triángulo.

