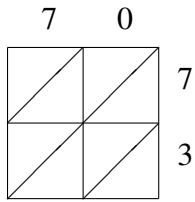
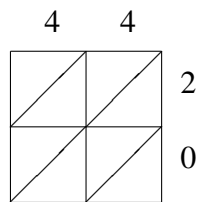


Multiplicación por Celosía (D)

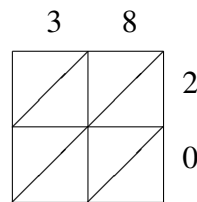
Use la multiplicación por celosía para hallar cada producto.



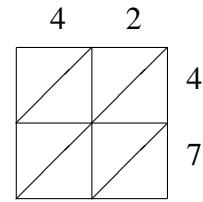
$70 \times 73 = \underline{\hspace{2cm}}$



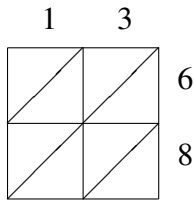
$44 \times 20 = \underline{\hspace{2cm}}$



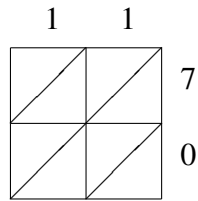
$38 \times 20 = \underline{\hspace{2cm}}$



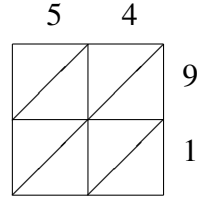
$42 \times 47 = \underline{\hspace{2cm}}$



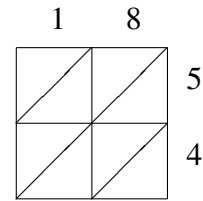
$13 \times 68 = \underline{\hspace{2cm}}$



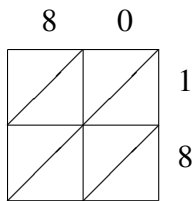
$11 \times 70 = \underline{\hspace{2cm}}$



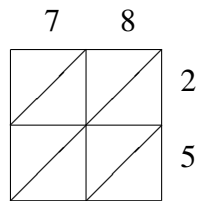
$54 \times 91 = \underline{\hspace{2cm}}$



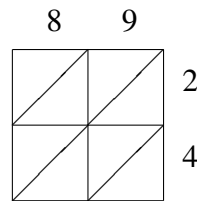
$18 \times 54 = \underline{\hspace{2cm}}$



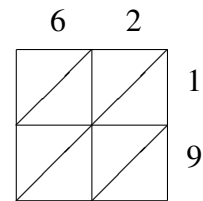
$80 \times 18 = \underline{\hspace{2cm}}$



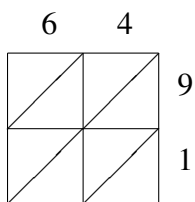
$78 \times 25 = \underline{\hspace{2cm}}$



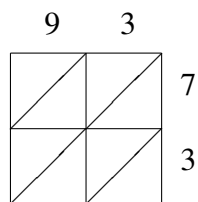
$89 \times 24 = \underline{\hspace{2cm}}$



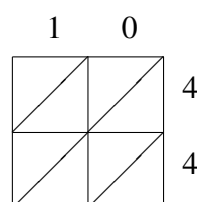
$62 \times 19 = \underline{\hspace{2cm}}$



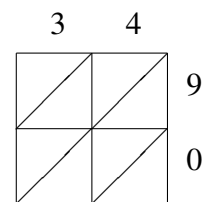
$64 \times 91 = \underline{\hspace{2cm}}$



$93 \times 73 = \underline{\hspace{2cm}}$



$10 \times 44 = \underline{\hspace{2cm}}$



$34 \times 90 = \underline{\hspace{2cm}}$