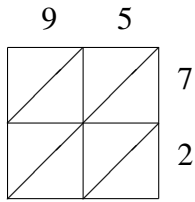
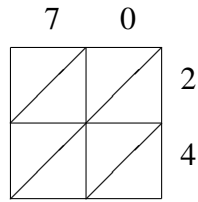


Multiplicación por Celosía (F)

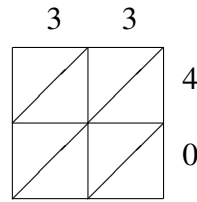
Use la multiplicación por celosía para hallar cada producto.



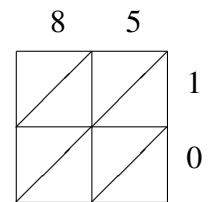
$95 \times 72 = \underline{\hspace{2cm}}$



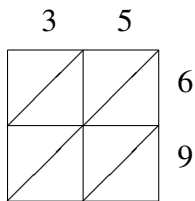
$70 \times 24 = \underline{\hspace{2cm}}$



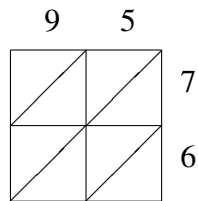
$33 \times 40 = \underline{\hspace{2cm}}$



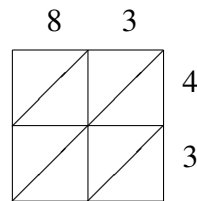
$85 \times 10 = \underline{\hspace{2cm}}$



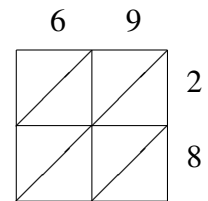
$35 \times 69 = \underline{\hspace{2cm}}$



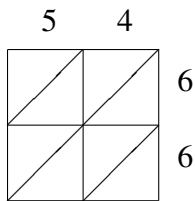
$95 \times 76 = \underline{\hspace{2cm}}$



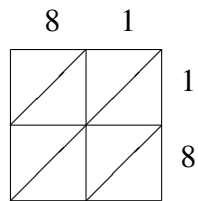
$83 \times 43 = \underline{\hspace{2cm}}$



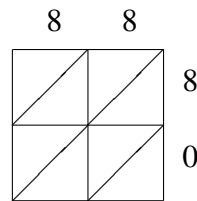
$69 \times 28 = \underline{\hspace{2cm}}$



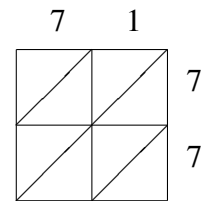
$54 \times 66 = \underline{\hspace{2cm}}$



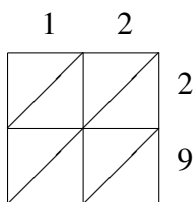
$81 \times 18 = \underline{\hspace{2cm}}$



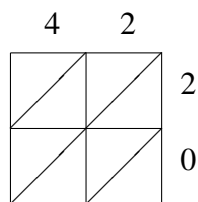
$88 \times 80 = \underline{\hspace{2cm}}$



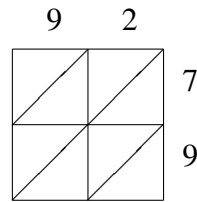
$71 \times 77 = \underline{\hspace{2cm}}$



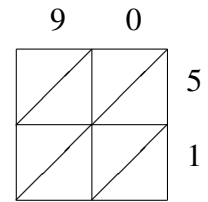
$12 \times 29 = \underline{\hspace{2cm}}$



$42 \times 20 = \underline{\hspace{2cm}}$



$92 \times 79 = \underline{\hspace{2cm}}$



$90 \times 51 = \underline{\hspace{2cm}}$