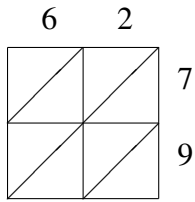
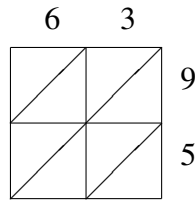


Multiplicación por Celosía (G)

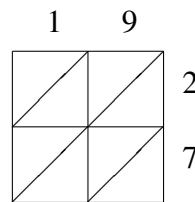
Use la multiplicación por celosía para hallar cada producto.



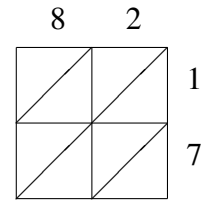
$62 \times 79 = \underline{\hspace{2cm}}$



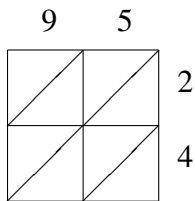
$63 \times 95 = \underline{\hspace{2cm}}$



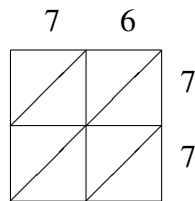
$19 \times 27 = \underline{\hspace{2cm}}$



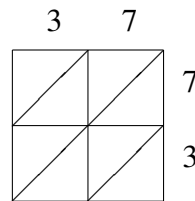
$82 \times 17 = \underline{\hspace{2cm}}$



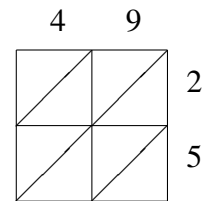
$95 \times 24 = \underline{\hspace{2cm}}$



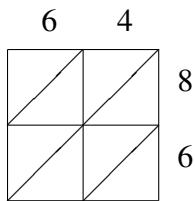
$76 \times 77 = \underline{\hspace{2cm}}$



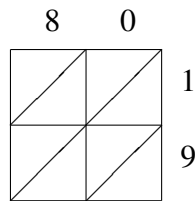
$37 \times 73 = \underline{\hspace{2cm}}$



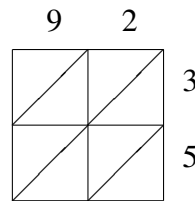
$49 \times 25 = \underline{\hspace{2cm}}$



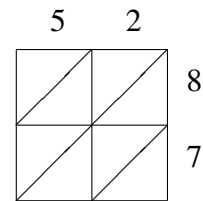
$64 \times 86 = \underline{\hspace{2cm}}$



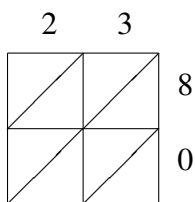
$80 \times 19 = \underline{\hspace{2cm}}$



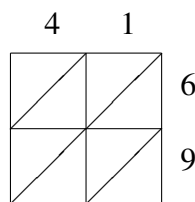
$92 \times 35 = \underline{\hspace{2cm}}$



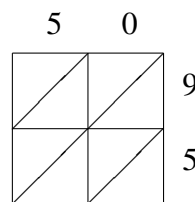
$52 \times 87 = \underline{\hspace{2cm}}$



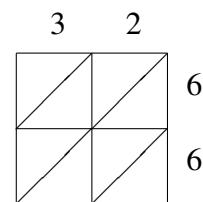
$23 \times 80 = \underline{\hspace{2cm}}$



$41 \times 69 = \underline{\hspace{2cm}}$



$50 \times 95 = \underline{\hspace{2cm}}$



$32 \times 66 = \underline{\hspace{2cm}}$