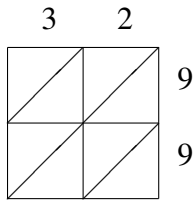
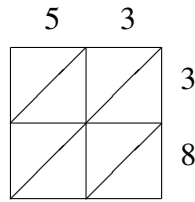


# Multiplicación por Celosía (I)

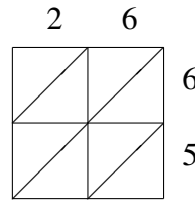
Use la multiplicación por celosía para hallar cada producto.



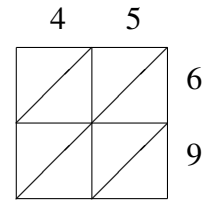
$32 \times 99 = \underline{\hspace{2cm}}$



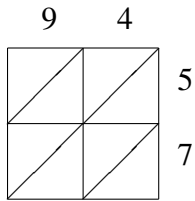
$53 \times 38 = \underline{\hspace{2cm}}$



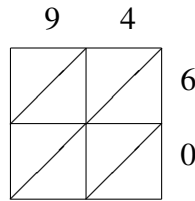
$26 \times 65 = \underline{\hspace{2cm}}$



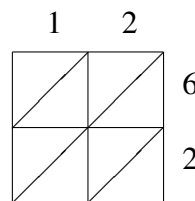
$45 \times 69 = \underline{\hspace{2cm}}$



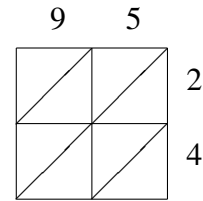
$94 \times 57 = \underline{\hspace{2cm}}$



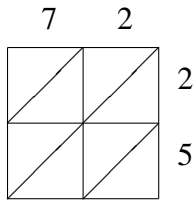
$94 \times 60 = \underline{\hspace{2cm}}$



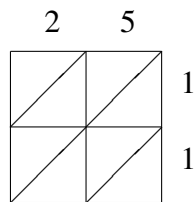
$12 \times 62 = \underline{\hspace{2cm}}$



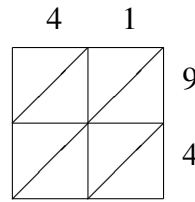
$95 \times 24 = \underline{\hspace{2cm}}$



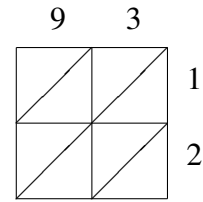
$72 \times 25 = \underline{\hspace{2cm}}$



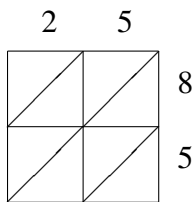
$25 \times 11 = \underline{\hspace{2cm}}$



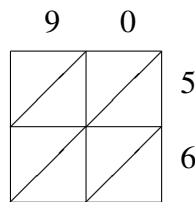
$41 \times 94 = \underline{\hspace{2cm}}$



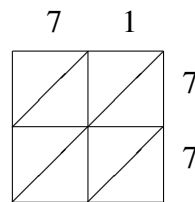
$93 \times 12 = \underline{\hspace{2cm}}$



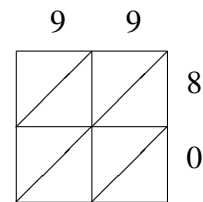
$25 \times 85 = \underline{\hspace{2cm}}$



$90 \times 56 = \underline{\hspace{2cm}}$



$71 \times 77 = \underline{\hspace{2cm}}$



$99 \times 80 = \underline{\hspace{2cm}}$