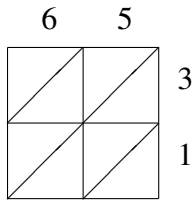
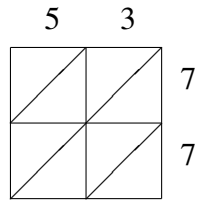


# Multiplicación por Celosía (J)

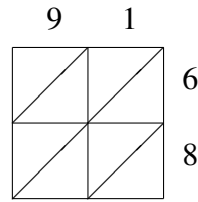
Use la multiplicación por celosía para hallar cada producto.



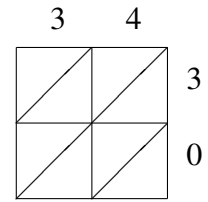
$65 \times 31 = \underline{\hspace{2cm}}$



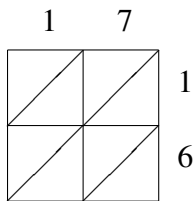
$53 \times 77 = \underline{\hspace{2cm}}$



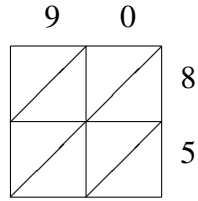
$91 \times 68 = \underline{\hspace{2cm}}$



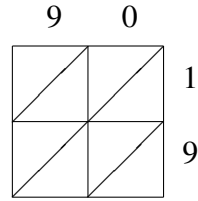
$34 \times 30 = \underline{\hspace{2cm}}$



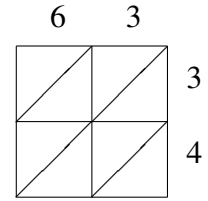
$17 \times 16 = \underline{\hspace{2cm}}$



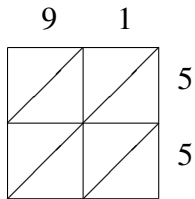
$90 \times 85 = \underline{\hspace{2cm}}$



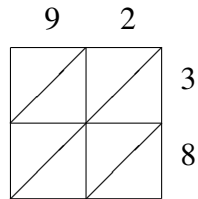
$90 \times 19 = \underline{\hspace{2cm}}$



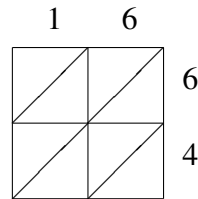
$63 \times 34 = \underline{\hspace{2cm}}$



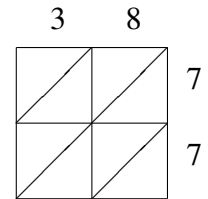
$91 \times 55 = \underline{\hspace{2cm}}$



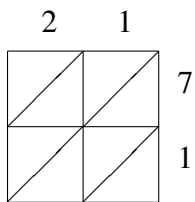
$92 \times 38 = \underline{\hspace{2cm}}$



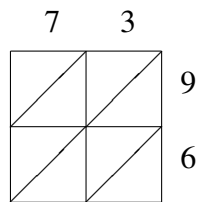
$16 \times 64 = \underline{\hspace{2cm}}$



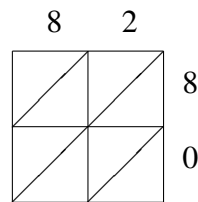
$38 \times 77 = \underline{\hspace{2cm}}$



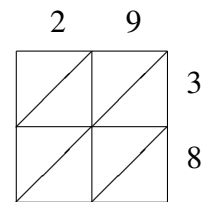
$21 \times 71 = \underline{\hspace{2cm}}$



$73 \times 96 = \underline{\hspace{2cm}}$



$82 \times 80 = \underline{\hspace{2cm}}$



$29 \times 38 = \underline{\hspace{2cm}}$