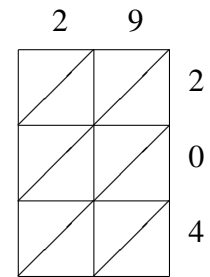
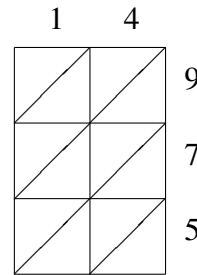
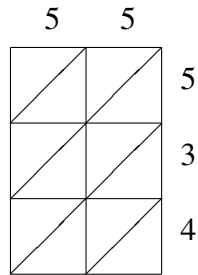
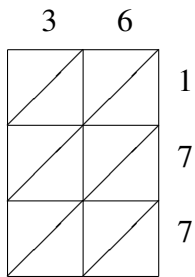
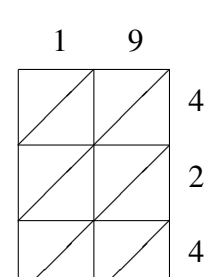
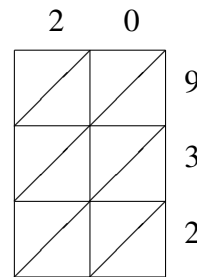
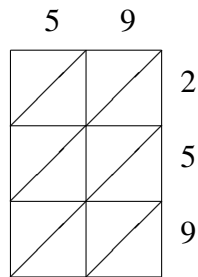
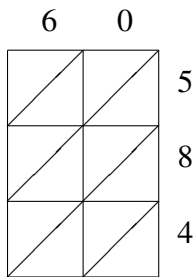


Multiplicación por Celosía (B)

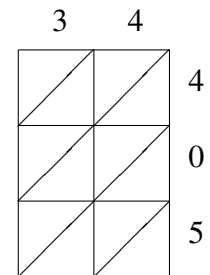
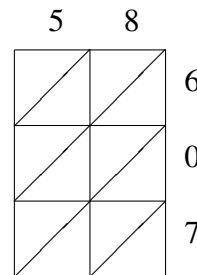
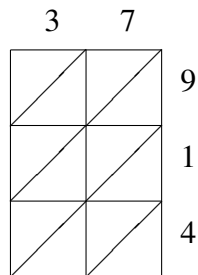
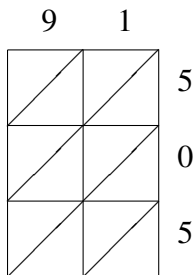
Use la multiplicación por celosía para hallar cada producto.



$36 \times 177 = \underline{\hspace{2cm}}$
 $55 \times 534 = \underline{\hspace{2cm}}$
 $14 \times 975 = \underline{\hspace{2cm}}$
 $29 \times 204 = \underline{\hspace{2cm}}$



$60 \times 584 = \underline{\hspace{2cm}}$
 $59 \times 259 = \underline{\hspace{2cm}}$
 $20 \times 932 = \underline{\hspace{2cm}}$
 $19 \times 424 = \underline{\hspace{2cm}}$



$91 \times 505 = \underline{\hspace{2cm}}$
 $37 \times 914 = \underline{\hspace{2cm}}$
 $58 \times 607 = \underline{\hspace{2cm}}$
 $34 \times 405 = \underline{\hspace{2cm}}$