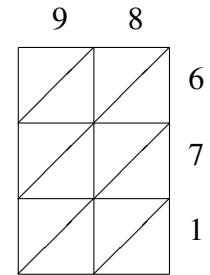
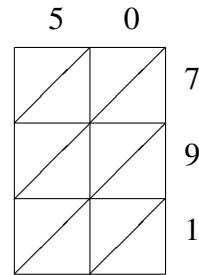
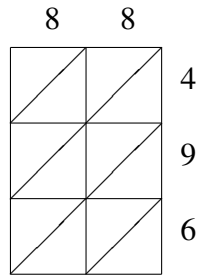
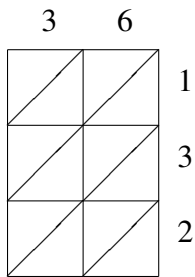
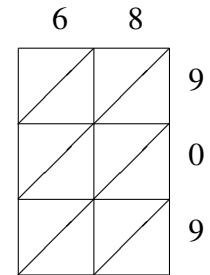
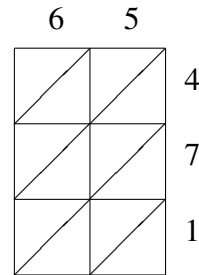
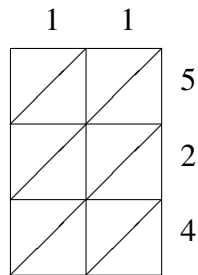
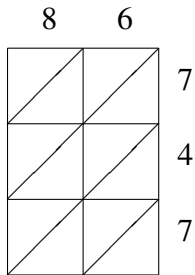


## Multiplicación por Celosía (D)

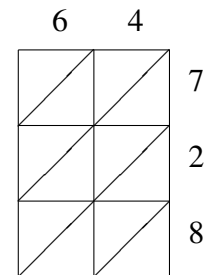
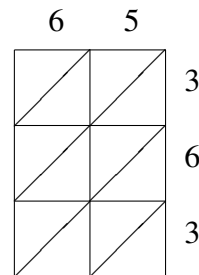
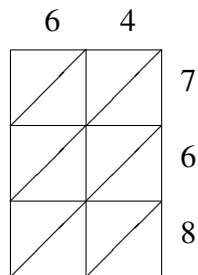
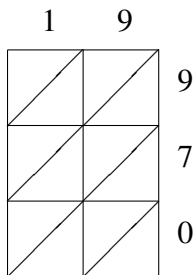
Use la multiplicación por celosía para hallar cada producto.



$36 \times 132 = \underline{\hspace{2cm}}$     
  $88 \times 496 = \underline{\hspace{2cm}}$     
  $50 \times 791 = \underline{\hspace{2cm}}$     
  $98 \times 671 = \underline{\hspace{2cm}}$



$86 \times 747 = \underline{\hspace{2cm}}$     
  $11 \times 524 = \underline{\hspace{2cm}}$     
  $65 \times 471 = \underline{\hspace{2cm}}$     
  $68 \times 909 = \underline{\hspace{2cm}}$



$19 \times 970 = \underline{\hspace{2cm}}$     
  $64 \times 768 = \underline{\hspace{2cm}}$     
  $65 \times 363 = \underline{\hspace{2cm}}$     
  $64 \times 728 = \underline{\hspace{2cm}}$