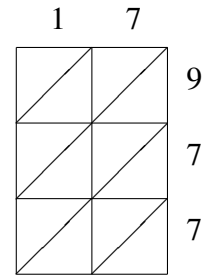
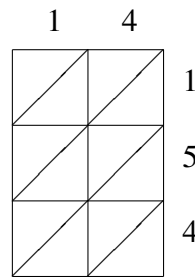
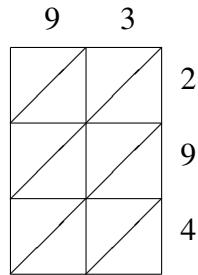
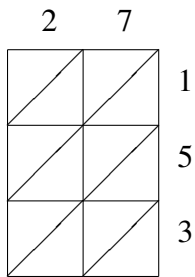


Multiplicación por Celosía (E)

Use la multiplicación por celosía para hallar cada producto.

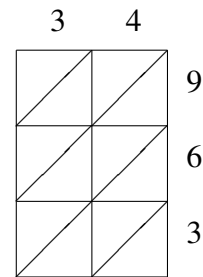
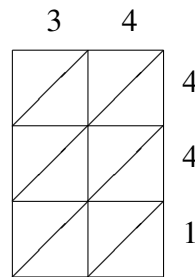
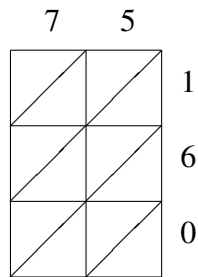
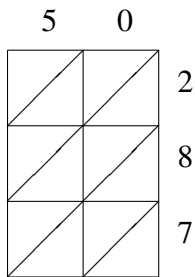


$27 \times 153 = \underline{\hspace{2cm}}$

$93 \times 294 = \underline{\hspace{2cm}}$

$14 \times 154 = \underline{\hspace{2cm}}$

$17 \times 977 = \underline{\hspace{2cm}}$

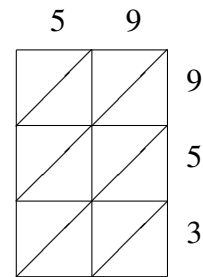
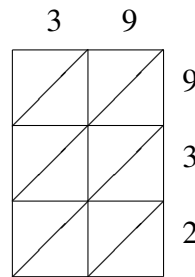
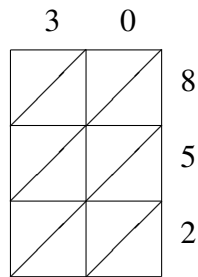
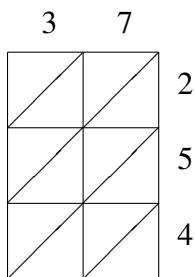


$50 \times 287 = \underline{\hspace{2cm}}$

$75 \times 160 = \underline{\hspace{2cm}}$

$34 \times 441 = \underline{\hspace{2cm}}$

$34 \times 963 = \underline{\hspace{2cm}}$



$37 \times 254 = \underline{\hspace{2cm}}$

$30 \times 852 = \underline{\hspace{2cm}}$

$39 \times 932 = \underline{\hspace{2cm}}$

$59 \times 953 = \underline{\hspace{2cm}}$