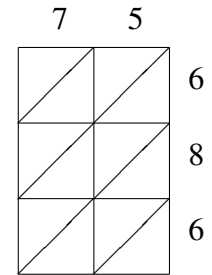
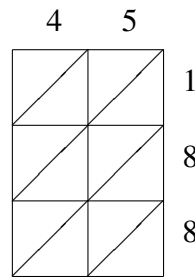
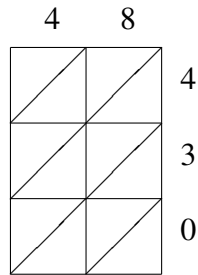
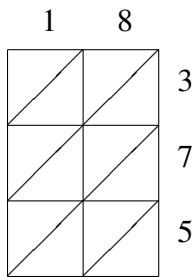


Multiplicación por Celosía (I)

Use la multiplicación por celosía para hallar cada producto.

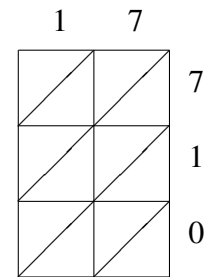
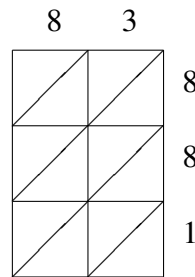
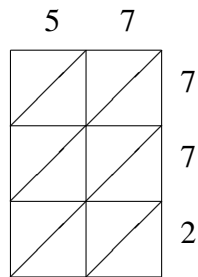
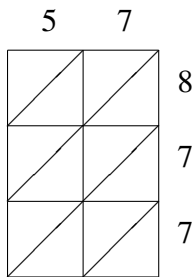


$18 \times 375 = \underline{\hspace{2cm}}$

$48 \times 430 = \underline{\hspace{2cm}}$

$45 \times 188 = \underline{\hspace{2cm}}$

$75 \times 686 = \underline{\hspace{2cm}}$

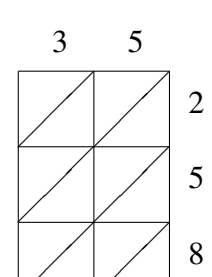
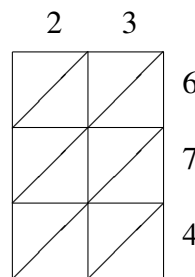
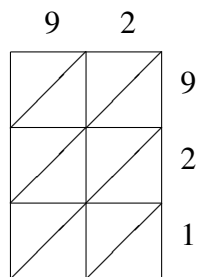
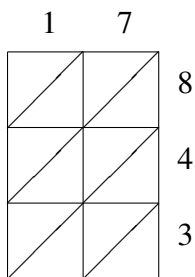


$57 \times 877 = \underline{\hspace{2cm}}$

$57 \times 772 = \underline{\hspace{2cm}}$

$83 \times 881 = \underline{\hspace{2cm}}$

$17 \times 710 = \underline{\hspace{2cm}}$



$17 \times 843 = \underline{\hspace{2cm}}$

$92 \times 921 = \underline{\hspace{2cm}}$

$23 \times 674 = \underline{\hspace{2cm}}$

$35 \times 258 = \underline{\hspace{2cm}}$