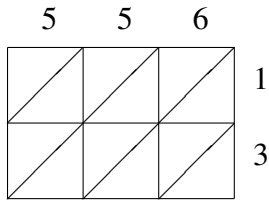
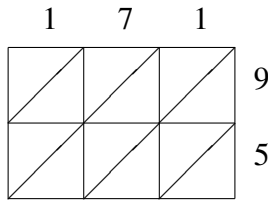


## Multiplicación por Celosía (B)

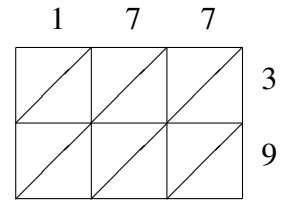
Use la multiplicación por celosía para hallar cada producto.



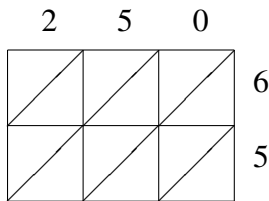
$556 \times 13 = \underline{\hspace{2cm}}$



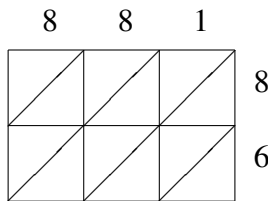
$171 \times 95 = \underline{\hspace{2cm}}$



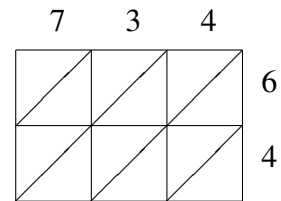
$177 \times 39 = \underline{\hspace{2cm}}$



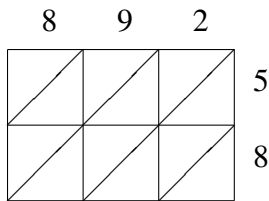
$250 \times 65 = \underline{\hspace{2cm}}$



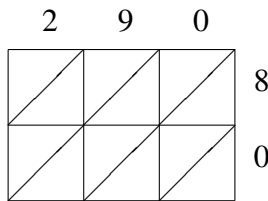
$881 \times 86 = \underline{\hspace{2cm}}$



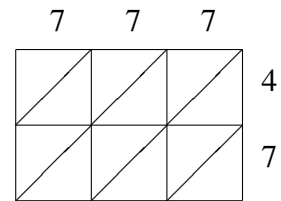
$734 \times 64 = \underline{\hspace{2cm}}$



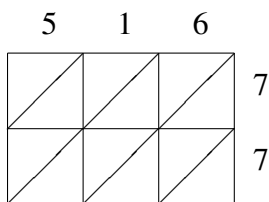
$892 \times 58 = \underline{\hspace{2cm}}$



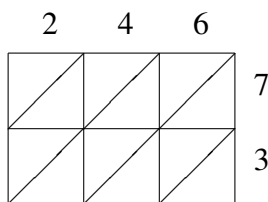
$290 \times 80 = \underline{\hspace{2cm}}$



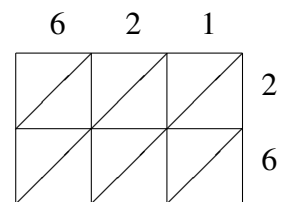
$777 \times 47 = \underline{\hspace{2cm}}$



$516 \times 77 = \underline{\hspace{2cm}}$



$246 \times 73 = \underline{\hspace{2cm}}$



$621 \times 26 = \underline{\hspace{2cm}}$