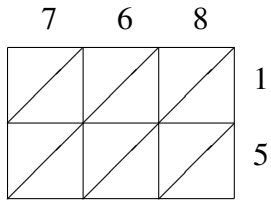
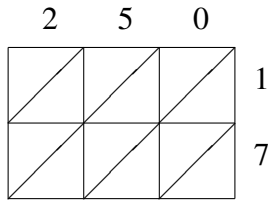


Multiplicación por Celosía (D)

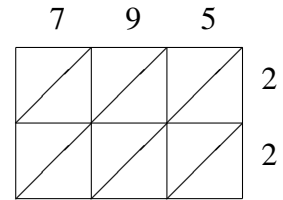
Use la multiplicación por celosía para hallar cada producto.



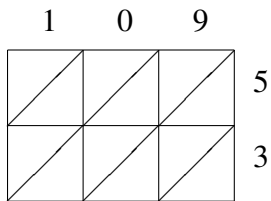
$768 \times 15 = \underline{\hspace{2cm}}$



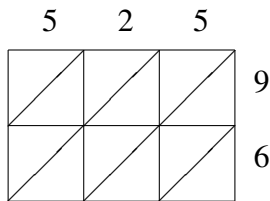
$250 \times 17 = \underline{\hspace{2cm}}$



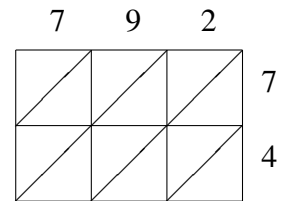
$795 \times 22 = \underline{\hspace{2cm}}$



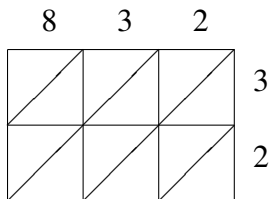
$109 \times 53 = \underline{\hspace{2cm}}$



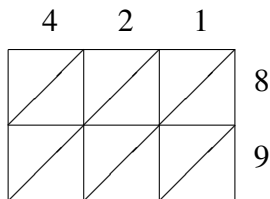
$525 \times 96 = \underline{\hspace{2cm}}$



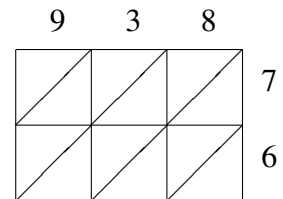
$792 \times 74 = \underline{\hspace{2cm}}$



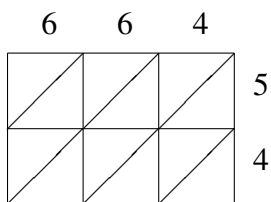
$832 \times 32 = \underline{\hspace{2cm}}$



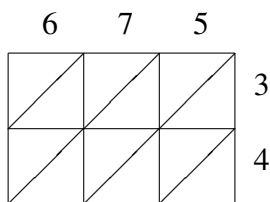
$421 \times 89 = \underline{\hspace{2cm}}$



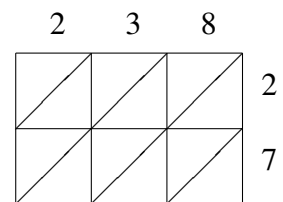
$938 \times 76 = \underline{\hspace{2cm}}$



$664 \times 54 = \underline{\hspace{2cm}}$



$675 \times 34 = \underline{\hspace{2cm}}$



$238 \times 27 = \underline{\hspace{2cm}}$