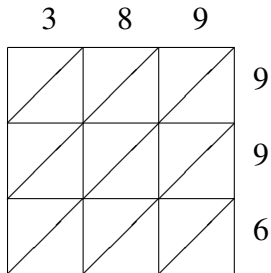
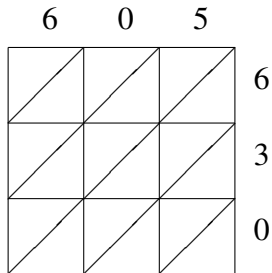


Multiplicación por Celosía (A)

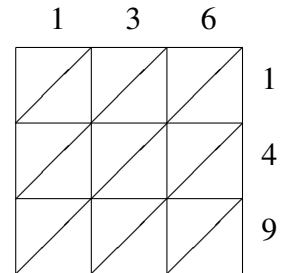
Use la multiplicación por celosía para hallar cada producto.



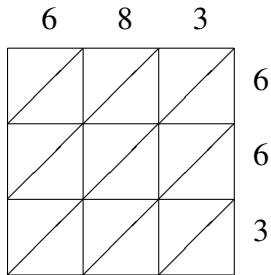
$389 \times 996 = \underline{\hspace{2cm}}$



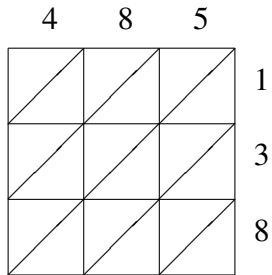
$605 \times 630 = \underline{\hspace{2cm}}$



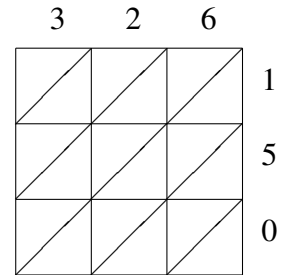
$136 \times 149 = \underline{\hspace{2cm}}$



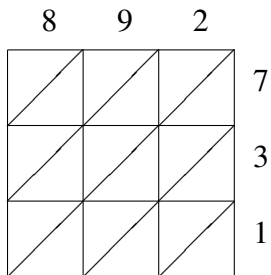
$683 \times 663 = \underline{\hspace{2cm}}$



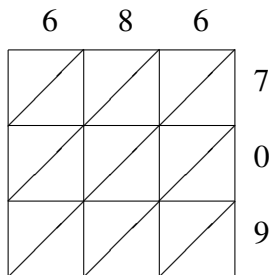
$485 \times 138 = \underline{\hspace{2cm}}$



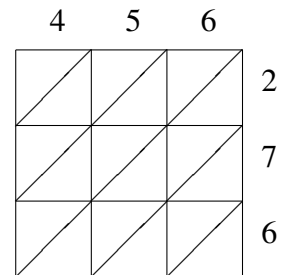
$326 \times 150 = \underline{\hspace{2cm}}$



$892 \times 731 = \underline{\hspace{2cm}}$



$686 \times 709 = \underline{\hspace{2cm}}$



$456 \times 276 = \underline{\hspace{2cm}}$