



# ¿QUÉ HAY EN EL REGALO? (C)


¿Qué número hay en cada regalo?

$20 \div 5 =$  

$6 \div 3 =$  

$8 \div 2 =$  

$6 \div 1 =$  

$9 \div 3 =$  

$2 \div$    $= 2$

$25 \div$    $= 5$

$35 \div$    $= 5$


$14 \div$    $= 7$

$35 \div$    $= 7$

$$    $\div 6 = 6$

$$    $\div 6 = 2$

$$    $\div 7 = 7$

$$    $\div 1 = 3$


$$    $\div 7 = 3$

$15 \div 3 =$  

$10 \div 5 =$  

$28 \div 4 =$  

$8 \div 4 =$  

$15 \div 3 =$  


$16 \div$    $= 4$


$25 \div$    $= 5$


$12 \div$    $= 4$


$18 \div$    $= 3$


$2 \div$    $= 1$

$$    $\div 1 = 6$

$$    $\div 5 = 6$

$$    $\div 4 = 2$

$$    $\div 3 = 5$

$$    $\div 4 = 6$

$4 \div 2 =$  

$24 \div 4 =$  

$24 \div 4 =$  

$4 \div 2 =$  

$8 \div 4 =$  


$35 \div$    $= 5$


$12 \div$    $= 3$


$5 \div$    $= 1$


$12 \div$    $= 6$


$6 \div$    $= 2$

$$    $\div 6 = 1$

$$    $\div 4 = 3$

$$    $\div 6 = 1$

$$    $\div 4 = 3$

$$    $\div 7 = 6$