

¿QUÉ HAY EN EL REGALO? (F)

¿Qué número hay en cada regalo?

$21 \div 3 =$ 

$42 \div 7 =$ 

$36 \div 6 =$ 

$30 \div 5 =$ 

$36 \div 6 =$ 

$18 \div$  $= 6$

$6 \div$  $= 2$

$21 \div$  $= 3$

$20 \div$  $= 4$

$35 \div$  $= 7$


$$  $\div 7 = 6$

$$  $\div 2 = 3$

$$  $\div 7 = 6$


$$  $\div 6 = 5$

$$  $\div 6 = 1$

$6 \div 3 =$ 

$28 \div 4 =$ 

$24 \div 6 =$ 

$9 \div 3 =$ 

$20 \div 4 =$ 


$25 \div$  $= 5$


$30 \div$  $= 5$


$18 \div$  $= 3$


$6 \div$  $= 6$


$5 \div$  $= 1$

$$  $\div 6 = 3$

$$  $\div 3 = 3$

$$  $\div 5 = 2$

$$  $\div 6 = 7$

$$  $\div 1 = 5$

$35 \div 5 =$ 

$4 \div 2 =$ 

$24 \div 4 =$ 

$7 \div 7 =$ 

$25 \div 5 =$ 

$20 \div$  $= 4$


$28 \div$  $= 7$


$35 \div$  $= 7$


$4 \div$  $= 4$


$16 \div$  $= 4$

$$  $\div 4 = 1$

$$  $\div 2 = 5$

$$  $\div 2 = 1$

$$  $\div 3 = 7$

$$  $\div 6 = 4$