


¿QUÉ HAY EN EL REGALO? (C)

¿Qué número hay en cada regalo?

$35 \div 5 =$ 

$18 \div 6 =$ 

$56 \div 8 =$ 

$3 \div 1 =$ 

$8 \div 4 =$ 

$21 \div$  $= 7$


$56 \div$  $= 8$

$36 \div$  $= 6$

$64 \div$  $= 8$

$36 \div$  $= 6$

 $\div 5 = 3$

 $\div 2 = 3$


 $\div 6 = 2$

 $\div 5 = 7$


 $\div 7 = 8$

$28 \div 7 =$ 

$16 \div 4 =$ 

$5 \div 1 =$ 

$24 \div 4 =$ 

$8 \div 1 =$ 

$5 \div$  $= 1$


$7 \div$  $= 1$


$21 \div$  $= 7$


$10 \div$  $= 2$

$48 \div$  $= 8$

 $\div 1 = 4$

 $\div 1 = 2$

 $\div 4 = 5$

 $\div 3 = 8$

 $\div 5 = 6$

$30 \div 6 =$ 

$18 \div 3 =$ 

$32 \div 4 =$ 

$16 \div 2 =$ 

$8 \div 4 =$ 

$4 \div$  $= 1$

$12 \div$  $= 2$

$21 \div$  $= 7$


$9 \div$  $= 3$

$18 \div$  $= 6$

 $\div 6 = 1$

 $\div 2 = 7$

 $\div 7 = 2$

 $\div 3 = 4$

 $\div 7 = 7$