

¿QUÉ HAY EN EL REGALO? (D)

¿Qué número hay en cada regalo?

$14 \div 7 =$ 

$16 \div 8 =$ 

$8 \div 4 =$ 

$35 \div 7 =$ 

$7 \div 7 =$ 

$21 \div$  $= 7$

$4 \div$  $= 2$

$24 \div$  $= 8$

$30 \div$  $= 5$

$21 \div$  $= 7$

$$  $\div 5 = 3$

$$  $\div 6 = 1$

$$  $\div 4 = 8$

$$  $\div 4 = 3$

$$  $\div 2 = 1$

$16 \div 2 =$ 

$8 \div 2 =$ 

$28 \div 7 =$ 

$36 \div 6 =$ 

$49 \div 7 =$ 

$8 \div$  $= 1$


$21 \div$  $= 3$

$12 \div$  $= 3$


$8 \div$  $= 2$


$6 \div$  $= 1$

$$  $\div 7 = 8$

$$  $\div 6 = 6$


$$  $\div 5 = 1$

$$  $\div 2 = 4$

$$  $\div 5 = 7$

$16 \div 4 =$ 

$6 \div 2 =$ 

$6 \div 1 =$ 

$15 \div 5 =$ 

$30 \div 6 =$ 

$28 \div$  $= 4$


$32 \div$  $= 4$


$28 \div$  $= 4$


$8 \div$  $= 2$


$6 \div$  $= 1$

$$  $\div 8 = 2$

$$  $\div 6 = 3$

$$  $\div 2 = 3$

$$  $\div 1 = 6$

$$  $\div 6 = 2$

¿QUÉ HAY EN EL REGALO? (D) RESPUESTAS

¿Qué número hay en cada regalo?

$14 \div 7 = 2$	$16 \div 2 = 8$	$16 \div 4 = 4$
$16 \div 8 = 2$	$8 \div 2 = 4$	$6 \div 2 = 3$
$8 \div 4 = 2$	$28 \div 7 = 4$	$6 \div 1 = 6$
$35 \div 7 = 5$	$36 \div 6 = 6$	$15 \div 5 = 3$
$7 \div 7 = 1$	$49 \div 7 = 7$	$30 \div 6 = 5$

$21 \div 3 = 7$	$8 \div 8 = 1$	$28 \div 7 = 4$
$4 \div 2 = 2$	$21 \div 7 = 3$	$32 \div 8 = 4$
$24 \div 3 = 8$	$12 \div 4 = 3$	$28 \div 7 = 4$
$30 \div 6 = 5$	$8 \div 4 = 2$	$8 \div 4 = 2$
$21 \div 3 = 7$	$6 \div 6 = 1$	$6 \div 6 = 1$

$15 \div 5 = 3$	$56 \div 7 = 8$	$16 \div 8 = 2$
$6 \div 6 = 1$	$36 \div 6 = 6$	$18 \div 6 = 3$
$32 \div 4 = 8$	$5 \div 5 = 1$	$6 \div 2 = 3$
$12 \div 4 = 3$	$8 \div 2 = 4$	$6 \div 1 = 6$
$2 \div 2 = 1$	$35 \div 5 = 7$	$12 \div 6 = 2$