

¿QUÉ HAY EN EL REGALO? (B)

¿Qué número hay en cada regalo?

$18 \div 6 =$ 

$24 \div 3 =$ 

$4 \div 4 =$ 

$20 \div 5 =$ 

$20 \div 2 =$ 

$70 \div$  $= 10$


$49 \div$  $= 7$

$40 \div$  $= 10$


$27 \div$  $= 9$

$24 \div$  $= 4$


$$  $\div 8 = 1$

$$  $\div 2 = 3$


$$  $\div 5 = 8$

$$  $\div 2 = 3$


$$  $\div 8 = 3$

$70 \div 10 =$ 

$6 \div 2 =$ 

$12 \div 4 =$ 

$8 \div 1 =$ 

$50 \div 10 =$ 

$9 \div$  $= 3$


$32 \div$  $= 4$

$16 \div$  $= 2$

$15 \div$  $= 5$


$4 \div$  $= 1$

$$  $\div 10 = 3$


$$  $\div 10 = 7$

$$  $\div 5 = 6$

$$  $\div 6 = 4$

$$  $\div 4 = 8$

$16 \div 4 =$ 

$90 \div 10 =$ 

$42 \div 7 =$ 

$42 \div 7 =$ 

$28 \div 7 =$ 


$42 \div$  $= 7$


$20 \div$  $= 10$


$18 \div$  $= 3$


$5 \div$  $= 5$


$28 \div$  $= 4$

$$  $\div 9 = 7$

$$  $\div 3 = 8$

$$  $\div 5 = 8$

$$  $\div 10 = 5$

$$  $\div 7 = 5$