


¿QUÉ HAY EN EL REGALO? (1)

¿Qué número hay en cada regalo?

$40 \div 4 =$ 

$18 \div 3 =$ 

$35 \div 5 =$ 

$48 \div 6 =$ 

$9 \div 3 =$ 

$80 \div$  $= 10$


$7 \div$  $= 7$

$24 \div$  $= 8$


$6 \div$  $= 6$


$27 \div$  $= 3$

$$  $\div 2 = 8$

$$  $\div 7 = 5$

$$  $\div 5 = 7$


$$  $\div 2 = 7$

$$  $\div 1 = 9$

$7 \div 1 =$ 

$18 \div 3 =$ 

$8 \div 2 =$ 

$72 \div 9 =$ 

$15 \div 5 =$ 


$36 \div$  $= 4$


$72 \div$  $= 8$


$30 \div$  $= 5$


$4 \div$  $= 1$


$70 \div$  $= 10$


$$  $\div 7 = 7$


$$  $\div 1 = 3$

$$  $\div 2 = 3$


$$  $\div 8 = 2$

$$  $\div 3 = 7$

$45 \div 9 =$ 

$70 \div 10 =$ 

$20 \div 4 =$ 

$100 \div 10 =$ 

$28 \div 7 =$ 


$32 \div$  $= 4$


$6 \div$  $= 3$


$2 \div$  $= 1$


$40 \div$  $= 8$


$1 \div$  $= 1$

$$  $\div 10 = 6$

$$  $\div 6 = 1$

$$  $\div 5 = 2$

$$  $\div 1 = 10$

$$  $\div 6 = 6$